

Winter Vacation

Homework!

G-5



## حفظ سورة الزلزلة

بِسْمِ اللّٰهِ الرَّحْمٰنِ الرَّحِیْمِ ۝

اِذَا زُلْزِلَتِ الْاَرْضُ زِلْزَالَهَا ۝ ۱ ۝ وَاَخْرَجَتِ الْاَرْضُ

منزل ۷

Ikha Ikha Meem Saakin Qalqala Qalb Idghaam Idghaam Meem Saakin Ghun

30 عَمَّ ۳۰ 844 ۸۴۴ 100 اَلْعَدِیْتُ ۱۰۰

اَنْقَالَهَا ۝ ۱ ۝ وَقَالَ الْاِنْسَانُ مَا لَهَا ۝ ۲ ۝ یَوْمَئِذٍ تُحَدِّثُ

اَخْبَارَهَا ۝ ۳ ۝ بِاَنَّ رَبَّكَ اَوْحٰی لَهَا ۝ ۴ ۝ یَوْمَئِذٍ یَّصُدُّ النَّاسُ

اَشْتَاتًا ۝ ۵ ۝ لِّیُرَوْا اَعْمَالَهُمْ ۝ ۶ ۝ فَمَنْ یَّعْمَلْ مِثْقَالَ ذَرَّةٍ

خَیْرًا یَّرَهُ ۝ ۷ ۝ وَمَنْ یَّعْمَلْ مِثْقَالَ ذَرَّةٍ شَرًّا یَّرَهُ ۝ ۸ ۝

# سورة البينة

آيَاتُهَا ٨

(٩٨) سُورَةُ الْبَيِّنَاتِ مَكِّيَّةٌ (١٠٠)

رُكُوعُهَا ١

بِسْمِ اللَّهِ الرَّحْمَنِ الرَّحِيمِ

لَمْ يَكُنِ الَّذِينَ كَفَرُوا مِنْ أَهْلِ الْكِتَابِ وَالْبَشَرِ كَيْنَ مُنْفَكِينَ  
حَتَّى تَأْتِيَهُمُ الْبَيِّنَةُ ١ رَسُولٌ مِّنَ اللَّهِ يَتْلُوا صُحُفًا مُّطَهَّرَةً ٢  
فِيهَا كُتِبَ قَيِّمَةٌ ٣ وَمَا تَفَرَّقَ الَّذِينَ أُوتُوا الْكِتَابَ إِلَّا مِنْ  
بَعْدِ مَا جَاءَ تَهُمُ الْبَيِّنَةُ ٤ وَمَا أُمِرُوا إِلَّا لِيَعْبُدُوا اللَّهَ  
مُخْلِصِينَ لَهُ الدِّينَ ٥ حُنَفَاءَ وَيُقِيمُوا الصَّلَاةَ وَيُؤْتُوا الزَّكَاةَ  
وَذَلِكَ دِينُ الْقَيِّمَةِ ٦ إِنَّ الَّذِينَ كَفَرُوا مِنْ أَهْلِ الْكِتَابِ  
وَالْبَشَرِ كَيْنَ فِي نَارِ جَهَنَّمَ خَالِدِينَ فِيهَا ٧ أُولَئِكَ هُمْ شَرُّ الْبَرِيَّةِ ٨  
إِنَّ الَّذِينَ آمَنُوا وَعَمِلُوا الصَّالِحَاتِ ٩ أُولَئِكَ هُمْ خَيْرُ الْبَرِيَّةِ ١٠  
جَزَاءُ وَّهُمْ عِنْدَ رَبِّهِمْ جَدَّتْ ١١ عَدْنٍ تَجْرِي مِنْ تَحْتِهَا الْأَنْهَارُ خَالِدِينَ  
فِيهَا أَبَدًا ١٢ رَضِيَ اللَّهُ عَنْهُمْ وَرَضُوا عَنْهُ ١٣ ذَلِكَ لِمَنْ خَشِيَ رَبَّهُ ١٤

# تیسرا کلمہ

Third Kalima Tajweed

سُبْحَانَ اللَّهِ وَالْحَمْدُ لِلَّهِ وَلَا إِلَهَ إِلَّا اللَّهُ وَاللَّهُ أَكْبَرُ ط  
وَلَا حَوْلَ وَلَا قُوَّةَ إِلَّا بِاللَّهِ الْعَلِيِّ الْعَظِيمِ ط



اللہ پاک ہے اور سب تعریف اللہ کے لئے ہے اور اللہ کے سوا کوئی معبود نہیں  
اور اللہ بہت بڑا ہے گناہوں سے بچنے کی طاقت اور نیک کام کرنے کی  
توفیق نہیں مگر اللہ کی طرف سے جو بہت بلند عظمت والا ہے۔

Glory be to ALLAH and all praise be to ALLAH and there is none  
worthy of worship except ALLAH, and ALLAH is the Greatest.  
And there is no might or power except with ALLAH,  
the Exalted, the Great One.

◆ BOLD READ

◆ GHUNNAH

◆ QALQALA

◆ MAK 1.280 x 720

## 4th Kalima (Tauheed)

لَا إِلَهَ إِلَّا اللَّهُ وَحْدَهُ لَا شَرِيكَ لَهُ لَهُ الْمُلْكُ وَ لَهُ الْحَمْدُ يُحْيِي  
وَ يُمِيتُ وَ هُوَ حَيٌّ لَا يَمُوتُ أَبَدًا أَبَدًا ذُو الْجَلَالِ وَالْإِكْرَامِ  
بِيَدِهِ الْخَيْرُ وَهُوَ عَلَى كُلِّ شَيْءٍ قَدِيرٌ

La ilaha illallah wahdahu la sharika lahu, lahul mulku wa lahul  
hamdu yuhyi wa yumitu Wahuwa Hayyu-l Laa Yamootu Abadan  
Abada. Dhul Jalaali Wal Ikraam. Biyadihil Khair. Wahuwa Ala Kulli  
Shai-in Qadeer

*“There is none worthy of worship except Allah. He is alone and  
has no partner. To Him belongs the Kingdom and for Him is all  
praise. He gives life and causes death. In His hand is all good  
and He has power over everything”.*



**Pakistan International School, Al Aziziya, Jeddah**  
**Federal Junior Section 2023 - 2024**  
**Review Sheet for winter holidays homework**

Subject: Science

Class: V

Section A

**Q. 1: Encircle the correct option A, B, C or D in the box next to each question.**

|  |  |   |  |
|--|--|---|--|
| 1. Germinating seed need a continuous supply of:                         |  |   |  |
| <input type="radio"/> Oxygen   | <input type="radio"/> water                | <input type="radio"/> Carbon dioxide                | <input type="radio"/> Nitrogen             |
| 2. When the seed coat in monocot seeds splits, radicle emerges and grows |  |   |  |
| <input type="radio"/> Upward   | <input type="radio"/> Downward             | <input type="radio"/> Perpendicular to the Sunlight | <input type="radio"/> parallel to the soil |
| 3. Intensity of sound depends upon :                                     |  |   |  |
| <input type="radio"/> Amplitude  | <input type="radio"/> Distance from source | <input type="radio"/> Both of them                  | <input type="radio"/> None of them         |
| 4. What is the amplitude of a bus horn?                                  |  |   |  |
| <input type="radio"/> Low  | <input type="radio"/> Medium               | <input type="radio"/> High                          | <input type="radio"/> zero                 |
| 5. Cross pollination takes place by:                                     |  |   |  |
| <input type="radio"/> wind   | <input type="radio"/> birds                | <input type="radio"/> insects                       | <input type="radio"/> All of above         |
| 6. which one is translucent object                                       |  |   |  |
| <input type="radio"/> wood   | <input type="radio"/> Gold                 | <input type="radio"/> cardboard                     | <input type="radio"/> butter paper         |
| 7. The food storage part in monocot seed is                              |  |   |  |
| <input type="radio"/> Embryo   | <input type="radio"/> Radicle              | <input type="radio"/> Endosperm                     | <input type="radio"/> plumule              |
| 8. Sometimes light comes back when it falls on a surface. This is called |  |   |  |
| <input type="radio"/> Reflection   | <input type="radio"/> Image                | <input type="radio"/> Shadow                        | <input type="radio"/> Vibration            |
| 9. The first leaves in dicot seeds develop into:                         |  |   |  |
| <input type="radio"/> Shoot  | <input type="radio"/> Root                 | <input type="radio"/> leaves                        | <input type="radio"/> Flower               |
| 10. Speed of sound is fastest in:  |  |   |  |
| <input type="radio"/> solids   | <input type="radio"/> liquids              | <input type="radio"/> gases                         | <input type="radio"/> vacuum               |
| 11. When the light source gets closer to the object, the shadow will be: |  |   |  |
| <input type="radio"/> smaller  | <input type="radio"/> bigger               | <input type="radio"/> Of the same size              | <input type="radio"/> disappeared          |

|   |                            |                            |                               |
|---|----------------------------|----------------------------|-------------------------------|
| 12. The product of fertilization in flowering plants is : |                            |                            |                               |
| <input type="radio"/> plumule                             | <input type="radio"/> seed | <input type="radio"/> stem | <input type="radio"/> radical |

---

**Section B**

**Q. 2: Answer the following questions. (Short Answers)**

1. Describe the structure of monocot seeds.
2. How do different kinds of materials such as solids, liquids and gases affect the intensity of sound?
3. How do runner plants reproduce?
4. Why do the length and size of the shadow differ at different times of the day?
5. What is the reason that sound cannot travel in a vacuum?
6. What is noise? How badly noise affect the humans?
7. Differentiate between regular and diffused reflection.
8. Define the function of endosperm in monocot seed.

**Section C**

**Q. 3: Answer the Following Question. (Long Answer)**

1. Explain with the help of suitable diagram that the movement of the light source varies the location of a shadow.
2. What is pollination? Differentiate between self-pollination and cross pollination.
3. Describe the germination of chickpea seed and maize seed.
4. Prove that germination will not be possible without sunlight.
5. Write a comprehensive note on luminous and non luminous objects with suitable examples.

\*\*\*\*\*



# Pakistan International School Jeddah

## Federal Junior Section

### Winter Vacation Holiday (2023-2024)

Class/ Sec: V Subject: Social Studies Name: \_\_\_\_\_

#### Q1: Choose the Correct answer:

|  |                         |                        |                        |
|--|-------------------------|------------------------|------------------------|
| 1. Marco Polo spent _____ years in China.  |                         |                        |                        |
| 1-20   | 2-17                    | 3- 25                  | 4- 15                  |
| 2. _____ is the act of investigating unfamiliar places?  |                         |                        |                        |
| 1- Examination   | 2- Invitation           | 3- Exploration         | 4- Exhibition          |
| 3. What is the name of Ibn Batuta's book?  |                         |                        |                        |
| 1- Travels of Marco Polo   | 2- Rihla                | 3- NASA                | 4- Inuit               |
| 4. _____ is known as the ship of the desert.   |                         |                        |                        |
| 1- Ox  | 2- Camel                | 3- Buffalo             | 4- Horse               |
| 5. What is the name given to the important period of ocean going period?                       |                         |                        |                        |
| 1- The Age of Exploration  | 2- The Age of Discovery | 3-The Age of Invention | 4-The Age of Detection |
| 6. Vasco Da Gama was from _____.   |                         |                        |                        |
| 1- Portugal.   | 2- India                | 3- France              | 4- America             |
| 7. _____ is a special condition caused by extreme cold affecting the hands & feet.             |                         |                        |                        |
| 1- Cold  | 2- Anemia               | 3- Frostbite           | 4- Shivering           |
| 8. Seals, whales, polar bears and penguins are some of the animals found in the _____ Regions. |                         |                        |                        |
| 1- South   | 2- North                | 3- Polar               | 4- Cold                |
| 9. People of the Arctic are called _____.  |                         |                        |                        |
| 1- Eskimos   | 2- Nomad                | 3- Sami                | 4- Inuit               |
| 5. Marco Polo's father was a _____.  |                         |                        |                        |
| 1- Explorer  | 2- merchant             | 3- Artisan             | 4- Scholar             |



**Q2: Read the statements carefully and write “T” for True / “F” for False:**

1. Pakistan shares borders with 8 other countries.
2. The capital city of India is Kabul.
3. Pakistan is situated in the continent of Asia.
4. Staple food of Bangladesh and China is rice.
5. Deserts plants have few leaves and thick fleshy stems.

**Q3: Match the Column:**

| Column -A      | Column-B     |
|----------------|--------------|
| Neil Armstrong | merchant     |
| Ibn-Batuta     | A millennium |
| Antarctica     | Rihla        |
| Marco Polo     | Moon         |
| 1000 years     | Uninhabited  |

**Q4: Write the answers of following question in “One -Word”.**

**Q1: What is the full form of “OIC”?**

**Q2: Who was the first Greek explorer to reach the Arctic?**

**Q3: What is the name of Ibn-e-Battuta’s book?**

**Q4: Where is the Gobi Desert situated?**

**Q5: Which country shares the longest border with Pakistan?**

**Q5: Write the short answers of following question.**

**Q1: What makes Punjab the best farming area in Pakistan?**

**Q2: Why are equatorial forests important?**

**Q3: Name the countries that share a border with Pakistan?**

**Q4: How much of our arable land is under irrigation?**

**Q5: What are continental deserts? How are they formed?**

**Q6: Why is livestock an important part of agriculture?**

**Q7: Between which lines of latitude and longitude is Pakistan situated?**

**Q8: Why has the Antarctic region not been inhabited?**

**Q9: What is meant by interdependence?**

**Q10: Why is the population of desert regions so low?**

**Q6: Write the answers of following question in detail.**

**Q1: Why is there a need for interdependence?**

**Q2: Differentiate between a cash crop and a food crop. Give examples of each.**

**Q3: What are the two Polar Regions called? Differentiate between them.**

**Q4: What are some of the reasons why people explore?**

**Q5: Describe some of the different ways in which farmers irrigate their land.**

\*\*\*\*\*



**Pakistan International School, Al Azizia, Jeddah**  
**Federal Junior Section 2023 - 2024**

**Winter Vacation Task**

Subject: \_\_\_\_\_

Class: V

Total Marks: 25

Name: \_\_\_\_\_

Section: \_\_\_\_\_

**Section A**

**Q. 1: Encircle the correct option A, B, C or D in the box next to each question.**

**(6)**

|   |                                |                                       |                            |
|---|--------------------------------|---------------------------------------|----------------------------|
| 1. A Muslim can learn punctuality through _____               |                                |                                       |                            |
| <input type="radio"/> salah                                   | <input type="radio"/> lectures | <input type="radio"/> zakah           | <input type="radio"/> None |
| 2. A punctual man can earn _____                              |                                |                                       |                            |
| <input type="radio"/> fame                                    | <input type="radio"/> wealth   | <input type="radio"/> success in life | <input type="radio"/> None |
| 3. Ibrahim (AS) had _____ sons.                               |                                |                                       |                            |
| <input type="radio"/> two                                     | <input type="radio"/> twelve   | <input type="radio"/> one             | <input type="radio"/> None |
| 3. Ismail (AS) is the father of _____                         |                                |                                       |                            |
| <input type="radio"/> the Arabs                               | <input type="radio"/> the Jews | <input type="radio"/> the Copts       | <input type="radio"/> None |
| 4. The Name of second wife of Prophet Ibrahim (AS) was _____. |                                |                                       |                            |
| <input type="radio"/> Hajar                                   | <input type="radio"/> Sarah    | <input type="radio"/> Khadijah        | <input type="radio"/> None |
| 5. Ibrahim (AS) related his dream to _____                    |                                |                                       |                            |
| <input type="radio"/> Ismail (AS)                             | <input type="radio"/> Hajar    | <input type="radio"/> Ishaq (AS)      | <input type="radio"/> None |

**Section B**

**Q. 2: Write short answers for the following questions.**

**1. What did Ibrahim (AS) see in his dream?**

Ans. One night, Ibrahim (A.S) saw in a dream that he was slaughtering his son, Isma'il (A.S) for the acceptance of Allah.

**2. What was the response of Ismail (AS) when his father proposed to sacrifice?**

Ans. Prophet Ibrahim (A.S) related the dream to his son Isma'il (A.S). Ibrahim (A.S) found his son was ready to offer himself for sacrifice. Isma'il (A.S) said to his father: "In shaa'Allah, you will find me among the steadfast."

**3. What was the strange thing that happened to Ibrahim (AS)?**

Ans. Allah sent angels in the form of men to give a happy news to Ibrahim (A.S) that he and Sarah was going to have a baby. Although they were too old to conceive a child.

4. What is meant by gratitude?

Ans. Gratitude means acknowledgement of a favor or of assistance done by another.

5. Why is Prophet Muhammad (SAWW) called the best example of character?

Ans. Our Prophet (S.A.W) was the best example of moral character. He never spoke bad, indecent words to other. He always advised people to deal with others considerately.

6. Why is patience beneficial?

Ans. If a man remains patient in a situation where he is unhappy or angry, that is he keeps control over his mind, tongue and body, then he is considered an excellent human being. Allah honors such people with best rewards.

7. Who is the real strong person?

Ans. Prophet Mohammed (S.A.W) said: "He is not strong who knocks someone down, but strong is the one who controls himself when angry."

8. Mention the hadith related to thankfulness.

Ans. Abu Hurairah (RA) reported that the Messenger of Allah (SAW) said : He who is not thankful to people is not thankful to Allah.

9. What does a good Muslim do when he is favored by others?

Ans. A good Muslim always acknowledges and appreciate the favors done by others for him.

10. How does Allah reward the thankful Muslim?

Ans. Allah promises to reward the thankful Muslims by increasing His favors and blessings upon them.

11. Learn all the MCQs, objectives, and worksheets for Islamic Studies Units 7, 8, & 9 thoroughly.

### Section c

#### Q. 2: Write long answers for the following questions.

1. What are the benefits of respect and love in society?

Ans. Some benefits of respect and love in society are:

- 1) It build good relationships.
- 2) Others are more liable to listen when we show respect to others.
- 3) Everyone appreciates this kind of behaviour.
- 4) It creates a positive feeling in the society.
- 5) The young feel happy when they are loved.

2. What are some bad effects on the lives of those who are not punctual?

Ans. An individual who is not punctual makes life difficult for himself and for those with whom he associates, both at home and at work. His parents will be upset with him and cannot depend on him. His teachers will be annoyed because he delays the whole class with his tardiness. When he turns in an assignment late, he falls behind the rest of the class. If he is late on the job, he may not get a promotion. In business, if a person is late delivering orders or making payments he loses all his customers.

**3. What is meant by punctuality?**

Ans. Punctuality means to be on time or at the proper time. A good deed may not be appreciated if it is not done at the proper time. Punctuality is part of good character. It is one of the most desirable qualities of a Muslim and of a successful man.

**4. Why do Muslims celebrate Eid al-Adha?**

Ans. In memory of remarkable sacrifice of Hazrat Ibrahim (A.S), the pilgrims in Hajj stone three pillars in Mina and sacrifice animals, and Muslims all over the world celebrate Eid al-Adha (Eid of Sacrifice) every year. The slaughtering of sacrificial animals is a symbolic act of worship.

**5. Why Ibrahim (A.S) is called 'the father of the prophets'?**

Ans. Hazrat Ismail (A.S) is the ancestor of the Arabs and Hazrat Ishaq (A.S) is the ancestor of the Jews. Both of them were prophets, and so were some of their descendants. They were the sons of Ibrahim (A.S) that is why Ibrahim (A.S) is called 'the father of the prophets'.

\*\*\*\*\*



**Pakistan International School, Al Azizia, Jeddah**  
**Federal Junior Section 2023 - 2024**  
**Winter Vacation Task**

**Subject: Islamic Studies**

**Class: V**

**Total Marks: 25**

**Name: \_\_\_\_\_**

**Section: \_\_\_\_\_**

**Section A**

**Q. 1: Encircle the correct option A, B, C or D in the box next to each question.**

**(6)**

|   |                                |                                       |                            |
|---|--------------------------------|---------------------------------------|----------------------------|
| 1. A Muslim can learn punctuality through _____               |                                |                                       |                            |
| <input type="radio"/> salah                                   | <input type="radio"/> lectures | <input type="radio"/> zakah           | <input type="radio"/> None |
| 2. A punctual man can earn _____                              |                                |                                       |                            |
| <input type="radio"/> fame                                    | <input type="radio"/> wealth   | <input type="radio"/> success in life | <input type="radio"/> None |
| 3. Ibrahim (AS) had _____ sons.                               |                                |                                       |                            |
| <input type="radio"/> two                                     | <input type="radio"/> twelve   | <input type="radio"/> one             | <input type="radio"/> None |
| 3. Ismail (AS) is the father of _____                         |                                |                                       |                            |
| <input type="radio"/> the Arabs                               | <input type="radio"/> the Jews | <input type="radio"/> the Copts       | <input type="radio"/> None |
| 4. The Name of second wife of Prophet Ibrahim (AS) was _____. |                                |                                       |                            |
| <input type="radio"/> Hajar                                   | <input type="radio"/> Sarah    | <input type="radio"/> Khadijah        | <input type="radio"/> None |
| 5. Ibrahim (AS) related his dream to _____                    |                                |                                       |                            |
| <input type="radio"/> Ismail (AS)                             | <input type="radio"/> Hajar    | <input type="radio"/> Ishaq (AS)      | <input type="radio"/> None |

**Section B**

**Q. 2: Write short answers for the following questions.**

1. What did Ibrahim (AS) see in his dream?
2. What was the response of Ismail (AS) when his father proposed to sacrifice?
3. What was the strange thing that happened to Ibrahim (AS)?
4. What is meant by gratitude?
5. Why is Prophet Muhammad (SAWW) called the best example of character?
6. Why is patience beneficial?
7. Who is the real strong person?
8. Mention the hadith related to thankfulness.
9. others?
10. How does Allah reward the thankful Muslim?
11. Learn all the MCQs, objectives, and worksheets for Islamic Studies Units 7, 8, & 9 thoroughly.

**Section c**

**Q. 2: Write long answers for the following questions.**

1. What are the benefits of respect and love in society?
2. What are some bad effects on the lives of those who are not punctual?
3. What is meant by punctuality?
4. Why do Muslims celebrate Eid al-Adha?
5. Why Ibrahim (A.S) is called 'the father of the prophets'?

\*\*\*\*\*



**Pakistan International School Jeddah**  
**FJS 2022 – 23 ENGLISH (2<sup>nd</sup> Monthly Test Resource)**



**Units included:**

- **U# 6 L# 1 – 5**
- **U# 7 L# 1 – 5**
- **U# 8 L# 1 – 3**

**Pakistan International School Jeddah**  
**FJS 2022 – 23 ENGLISH (2<sup>nd</sup> Monthly Test Resource)**

**Q# 1: Fill the circle of correct option.**

|   |  |  |   |
|---|--|--|---|
| <b>1. I am very impatient person ___ I can't wait for anything. Select a conjunction.</b>           |  |  |   |
| <input type="radio"/> because   | <input type="radio"/> so                                     | <input type="radio"/> as                                   | <input type="radio"/> but                                   |
| <b>2. Koshi tried to get into the village, _____ the knight killed it.</b>                          |  |  |   |
| <input type="radio"/> but   | <input type="radio"/> if                                     | <input type="radio"/> and                                  | <input type="radio"/> when                                  |
| <b>3. A _____ is a spiral wind that travels very fast over land and sea.</b>                        |  |  |   |
| <input type="radio"/> snowstorm   | <input type="radio"/> tornado                                | <input type="radio"/> blizzard                             | <input type="radio"/> thunderstorm                          |
| <b>4. Choose the correct punctuation of: i'd love to be an explorer</b>                             |  |  |   |
| <input type="radio"/> 'i'd love to be an explorer,' he said.  | <input type="radio"/> 'i'd love to be an explorer', he said. | <input type="radio"/> 'i'd love to be an explorer' he said | <input type="radio"/> 'i'd love to be an explorer,' he said |
| <b>5. The pharaoh's body _____ in salty crystals.</b>   |  |  |   |
| <input type="radio"/> Was stuffed   | <input type="radio"/> Was covered                            | <input type="radio"/> Was enclosed                         | <input type="radio"/> Was wrapped                           |
| <b>6. A slave who fought against wild animals in an amphitheater is known as</b>                    |  |  |   |
| <input type="radio"/> Fighter   | <input type="radio"/> Wrestler                               | <input type="radio"/> gladiator                            | <input type="radio"/> hunter                                |
| <b>7. 'It was the most beautiful thing I had ever seen!' said Ana. Select the correct category.</b> |  |  |   |
| <input type="radio"/> A Fact  | <input type="radio"/> An Opinion                             | <input type="radio"/> A Headline                           | <input type="radio"/> A quotation                           |
| <b>8. 'Why did you do that?' match the correct emotion</b>  |  |  |   |
| <input type="radio"/> angry   | <input type="radio"/> Excited                                | <input type="radio"/> Impatient                            | <input type="radio"/> worried                               |
| <b>9. If you are _____, you don't mind waiting for people.</b>                                      |  |  |   |
| <input type="radio"/> excited   | <input type="radio"/> Impatient                              | <input type="radio"/> patient                              | <input type="radio"/> angry                                 |
| <b>10. What does a body of a person that has been preserved and took 3 months to do known as?</b>   |  |  |   |
| <input type="radio"/> canopy  | <input type="radio"/> gladiator                              | <input type="radio"/> mummy                                | <input type="radio"/> hieroglyphic                          |

**Pakistan International School Jeddah**  
**FJS 2022 – 23 ENGLISH (2<sup>nd</sup> Monthly Test Resource)**

**Q# 2: Answer any three of the following questions.**

1. Find the correct adjective for eyes, face, finger, eyebrows, nose from the following  
Hawked, moon-like, winged, hooded, pudgy
2. Write down the synonyms of following words: courageous, strong, frightening, danger
3. Write the following numbers in Roman numerals: 17, 115, 1550, 23
4. Use prefixes to make negative of following adjectives: fair, honest, responsible, friendly
5. Write definition on hieroglyphic, pharaoh, pyramid Roman numerals
6. Change the sentences to the past simple or past simple passive.
  - a. The plates and bowls were used by the Romans 2000 years ago.
  - b. Archeologists discovered the site in central London.
7. Complete the sentences from the key words given: severe, torrential, heavy, violent
  - a. A blizzard is a \_\_\_\_\_ storm
  - b. When a river overflows \_\_\_\_\_ flooding can take place.
  - c. \_\_\_\_\_ rain can cause flooding.
  - d. A typhoon is a \_\_\_\_\_ storm.
8. Complete sentences with past simple and past continuous form of verbs given in brackets.
  - a. The wind \_\_\_\_ (blow) the newspaper out of mum's hand as dad \_\_\_\_\_ (swim) in the sea.
  - b. Mum \_\_\_\_\_ (feed) the baby when she \_\_\_\_\_ (see) a shadow in the corridor.

**Q# 3: Answer any one of the Following Question.**

- Write a story with a moral 'Many hands make light work'
- Write a **short anecdote** on any one of the following situation  
A scary experience, a holiday adventure, a school trip
- Complete these **facts about a rainforest animal** of your choice  
(Name, location, appearance, diet, behavior, curious fact)
- Write about **an extreme weather situation** you have experienced in your country.  
(describe type of weather, how long did it last? what did you do? how did you feel?)

\*\*\*\*\*



**Pakistan International School, Al Azizia, Jeddah**  
**Federal Junior Section 2023 - 2024**  
**Winter Vacation Work**

**Subject: Computer**

**Class: V**

**Section A**

**Q. 1: Encircle the correct option A, B, C or D in the box next to each question.**

|  |   |  |                                       |
|--|---|--|---------------------------------------|
| 1.To print a document , click on file tab to display the—————view.                                       |   |  |                                       |
| <input type="radio"/> page setup   | <input type="radio"/> Backstage           | <input type="radio"/> page print preview | <input type="radio"/> printing        |
| 2.Compression reduces the ————— of the picture.  |   |  |                                       |
| <input type="radio"/> Brightness   | <input type="radio"/> Quality             | <input type="radio"/> Sharpness          | <input type="radio"/> Softness        |
| 3.—————can be very useful in grabbing the reader’s attention to the the specific text.                   |   |  |                                       |
| <input type="radio"/> Columns  | <input type="radio"/> Orientation         | <input type="radio"/> Margins            | <input type="radio"/> Text box        |
| 4.The page size of any new document in word is set to letter —————, by default.                          |   |  |                                       |
| <input type="radio"/> 8.5”x14”   | <input type="radio"/> 5.83”x11.69”        | <input type="radio"/> 5.83”x 8.27”       | <input type="radio"/> 8.5” x 11”      |
| 5.How many types of Orientation?   |   |  |                                       |
| <input type="radio"/> one  | <input type="radio"/> two                 | <input type="radio"/> four               | <input type="radio"/> six             |
| 6.—————Effect is used to make the picture looks more like a painting.                                    |   |  |                                       |
| <input type="radio"/> 3D   | <input type="radio"/> Color               | <input type="radio"/> 2D                 | <input type="radio"/> Artistic Effect |
| 7.Landscape gives a ————— layout to your document page.  |   |  |                                       |
| <input type="radio"/> Vertical   | <input type="radio"/> Row                 | <input type="radio"/> Horizontal         | <input type="radio"/> portrait        |
| 8.————means to cut a size from any sides to make it small and remove the unwanted area.                  |   |  |                                       |
| <input type="radio"/> wrap text  | <input type="radio"/> picture sizing      | <input type="radio"/> Crop               | <input type="radio"/> Corrections     |
| 9.————- chooses where the picture will appear on the page.   |   |  |                                       |
| <input type="radio"/> position   | <input type="radio"/> Formatting          | <input type="radio"/> Insert tab         | <input type="radio"/> Wrap text       |
| 10.————- repeat content at the bottom of every page while ————— repeat content at the top of every page. |   |  |                                       |
| <input type="radio"/> Header,Footer  | <input type="radio"/> Orientation, Margin | <input type="radio"/> Footer , Header    | <input type="radio"/> Row , Column    |

|   |                              |                                   |                                |
|---|------------------------------|-----------------------------------|--------------------------------|
| 11.A ————— is an empty area or blank space between the text and edge of the document on all the four sides. |                              |                                   |                                |
| <input type="radio"/> Header  | <input type="radio"/> Margin | <input type="radio"/> Orientation | <input type="radio"/> Text box |
| 12.How to apply a style set?  |                              |                                   |                                |

|   |  |   |                                      |
|---|--|---|--------------------------------------|
| Home tab=> Styles group   | <input type="radio"/> Insert tab => Text group | <input type="radio"/> Design tab => Document Formatting group | <input type="radio"/> None of these  |
| 13. There are different buttons that help in picture adjustments. These buttons can be found in _____ group on format tab |  |   |                                      |
| <input type="radio"/> Illustrations   | Insert   | <input type="radio"/> Adjust                                  | <input type="radio"/> Format         |
| 14. To Change to a different picture, keeping the formatting and size of the current picture. _____                       |  |   |                                      |
| <input type="radio"/> Change Picture  | <input type="radio"/> Remove Picture           | <input type="radio"/> Compress Picture                        | <input type="radio"/> None of these  |
| 15. _____ allows you to change the overall look of your picture.  |  |   |                                      |
| Picture layout  | <input type="radio"/> Picture Border           | <input type="radio"/> Quick Style Gallery                     | <input type="radio"/> Picture Effect |

## Section B

**Q. 2: Answer the following questions. (Short Answers)**

1. How do you remove formatting from a picture in word ?

Ans: \_\_\_\_\_  
 \_\_\_\_\_  
 \_\_\_\_\_

2. How to add header and footer in MS Word?

Ans: \_\_\_\_\_  
 \_\_\_\_\_  
 \_\_\_\_\_

3. Difference between Artistic effect and picture effect ?

Ans: \_\_\_\_\_  
 \_\_\_\_\_  
 \_\_\_\_\_  
 \_\_\_\_\_

4. How to add picture in MS Word ?

Ans: \_\_\_\_\_  
 \_\_\_\_\_  
 \_\_\_\_\_  
 \_\_\_\_\_  
 \_\_\_\_\_

5. Explain any three picture adjustment buttons in Adjust group on Format tab.

Ans: \_\_\_\_\_  
 \_\_\_\_\_  
 \_\_\_\_\_  
 \_\_\_\_\_

---

---

---

6.How do you freely float a picture in word ?

Ans: \_\_\_\_\_  
\_\_\_\_\_  
\_\_\_\_\_  
\_\_\_\_\_  
\_\_\_\_\_

7.How to print a document ?

Ans: \_\_\_\_\_  
\_\_\_\_\_  
\_\_\_\_\_  
\_\_\_\_\_  
\_\_\_\_\_

8.What is page Orientation ? write its types.

Ans: \_\_\_\_\_  
\_\_\_\_\_  
\_\_\_\_\_  
\_\_\_\_\_  
\_\_\_\_\_  
\_\_\_\_\_

9.Define Margin ?

Ans: \_\_\_\_\_  
\_\_\_\_\_  
\_\_\_\_\_

10.what is the use of Header and footer? also write its difference .

Ans: \_\_\_\_\_  
\_\_\_\_\_  
\_\_\_\_\_  
\_\_\_\_\_  
\_\_\_\_\_  
\_\_\_\_\_

# Section C

## Q. 3: Answer the Following Question. (Long Answer)

1. Describe the ways to add a column to Documents.

Ans: \_\_\_\_\_

\_\_\_\_\_

\_\_\_\_\_

\_\_\_\_\_

\_\_\_\_\_

\_\_\_\_\_

\_\_\_\_\_

\_\_\_\_\_

\_\_\_\_\_

\_\_\_\_\_

\_\_\_\_\_

\_\_\_\_\_

2. What is a Text box? How to add a text box in your documents? Explain Briefly.

Ans: \_\_\_\_\_

\_\_\_\_\_

\_\_\_\_\_

\_\_\_\_\_

\_\_\_\_\_

\_\_\_\_\_

\_\_\_\_\_

\_\_\_\_\_

\_\_\_\_\_

\_\_\_\_\_

\_\_\_\_\_

\_\_\_\_\_

\_\_\_\_\_

\_\_\_\_\_

\_\_\_\_\_

\_\_\_\_\_

\_\_\_\_\_

3. Write steps to crop a picture to a shape.

Ans: \_\_\_\_\_

\_\_\_\_\_

\_\_\_\_\_

\_\_\_\_\_

\_\_\_\_\_

\_\_\_\_\_

\_\_\_\_\_

\_\_\_\_\_

\_\_\_\_\_

\_\_\_\_\_

\_\_\_\_\_

\_\_\_\_\_

\_\_\_\_\_

\_\_\_\_\_

\_\_\_\_\_

\_\_\_\_\_

\_\_\_\_\_

پاکستان انٹرنیشنل اسکول جدہ  
فیڈرل جونیئر اسکول  
(سال: 2023-24)

Class 5<sup>th</sup>

Winter Vacation work

Arabic

صحیح جواب بتائیں

اختاری الاجابة الصحيحة بوضع علامة صح

|                                |            |             |                |
|--------------------------------|------------|-------------|----------------|
| ۱:- ما معنى الكلمة مؤسس ؟      |            |             |                |
| ا:- جاتا ہے                    | ب:-باني    | ج:-آج       | د:- وہ خوش ہوا |
| ۲:- ما معنى الكلمة محامي ؟     |            |             |                |
| ا:- خاندان                     | ب:- رکھنا  | ج:- وکیل    | د:- اکثر       |
| ۳:- ما معني الكلمة توضحا ؟ ؟   |            |             |                |
| ا- اس نے وضو کیا               | ب - طرف    | ج - واضح    | د - برش        |
| ۳:- هاتي مفرد الكلمة اشجار ؟   |            |             |                |
| ا:- شجرة                       | ب:-شجرتان  | ج:-اعشاب    | د:- يمكن       |
| ۵:- ما معني الكلمة فرحة ؟      |            |             |                |
| ا:- پاس                        | ب:- خوشی   | ج:- طعام    | د:- الاكل      |
| ۶:-هاتي مفرد كلمة سبورات ؟     |            |             |                |
| ا:- جبلان                      | ب:-سبورة   | ج:-فواكة    | د:- ماندان     |
| 7- ما معنى الكلمة اليوم ؟      |            |             |                |
| ا بارے                         | ب مکالہ    | ج آج        | د کل           |
| 8- ما معنى الكلمة عودة ؟       |            |             |                |
| ا واپسی                        | ب چلے جانا | ج بیٹھ جانا | د مدرسة        |
| 9- هل تحبيننا ان تكوني معلمه ؟ |            |             |                |
| ا لا                           | ب نعم      | ج يمكن      | د كيف          |
| 10 هاتي جمع الكلمة ثمر؟        |            |             |                |



اجيبى عن ثلاثة اسئلة

ما اسم موسس باكستان ؟

-----

متى ولد محمد على جناح ؟

-----

متى جمع الرجل ابناءه؟

-----

هل تحب ان تسافر بالقطار ؟

-----

هل تحبينا ان تكوني محامي ؟

-----

متى تستيقظ كل يوم ؟

-----

ترجمي الى العربية ؟

1 (يقرا خالد القران الكريم بعد الصلاة الفجر)

2 (سالت المعلمه التلاميذ و تلميذات الصف الخامس )

3 ( احب ان اكمل تدرستى في الجامعة )

-----  
 -----  
 -----  
 -----  
 -----



پاکستان انٹرنیشنل اسکول جدہ

## فیڈرل جونیئر سیکشن

مضمون: اردو جماعت: پنجم موسم سرما کی تعطیلات کا کام

س 1: درست جواب کے دائرے کو پنسل سے بھریئے:

1- اللہ تعالیٰ نے قرآن مجید میں ----- کی اطاعت کا حکم دیا ہے۔

○ ماں باپ      ○ دوستوں      ○ پڑوسیوں      ○ رشتے داروں

2: شمس کا مطلب ----- ہے۔

○ چاند      ○ ستارے      ○ سورج      ○ زمین

3: تیز سے کا دھارا سے شاعر کی مراد ----- ہے۔

○ آسانشیں      ○ مشکلات      ○ خوشیاں      ○ دولت

4- سائنس دان ہونے کے ساتھ ساتھ آپ ----- اور شاعر بھی تھے۔

○ اسکالر      ○ فوجی      ○ گلوکار      ○ مصور

5: نظم میں کھینے والے کی ----- پہ گیند لگی اور بلا ہاتھ سے چھوٹ گیا۔

○ سیدھی آنکھ      ○ الٹی آنکھ      ○ ناک      ○ چہرے

6: آپ نے ابتدائی تعلیم ----- سے حاصل کی۔

○ بھوپال      ○ لکھنؤ      ○ کراچی      ○ پشاور

7: نظم ----- کے کھیل کے بارے میں ہے۔

○ ہاکی      ○ فٹ بال      ○ کرکٹ      ○ ٹینس

8- ----- ماحول کی حفاظت کے خاموش سپاہی ہیں۔

- درخت      ○ سمندر      ○ کوڑا دان      ○ چوکی دان
- 9۔ پہیلیوں سے ----- کی مشق ہوتی ہے۔
- کھیلنے      ○ دوڑنے      ○ کھانے      ○ سوچنے
- 10۔ درخت کی جڑیں زمین کی ----- کو روک کر رکھتی ہیں۔
- پیداوار      ○ معدنیات      ○ شادابی      ○ مٹی

س 2: مندرجہ ذیل سوالات کے جوابات دیں:

- 1: ڈاکٹر سلیم الزمان صدیقی کب اور کہاں پیدا ہوئے؟
- 2: حضرت لقمان علیہ السلام اپنی ماں کے بارے میں کیا فرمایا کرتے تھے؟ کاپی میں نقل کیجیے۔
- 3: لطائف ہماری طبیعت پر کیا اثر ڈالتے ہیں؟
- 4: ردیف اور قافیہ کی تعریف کریں اور مثالیں دیں:
- 5: نظم کرکٹ کی شاعرہ کا نام بتائیے؟
- 6: حروفِ نداء اور حروفِ تاسف کی تعریف کریں اور مثالیں دیں:
- 7: درخت دنیا میں کب سے موجود ہیں؟
- 8: مندرجہ ذیل الفاظ کے جملے بنائیے:  
فطرت، ماحول، قابلیت، سنجیدہ، تربیت
- 9: ہماری زمین سیاروں کے جس نظام کا حصہ ہے، اسے نظام شمسی کیوں کہتے ہیں؟
- 10: بڑے بھائی کو خط لکھ کر اپنے معمولات کے بارے میں بتائیے۔

Winter Vacation Review Pack.

(2023-2024)

مضمون: اسلامیات

جماعت: پنجم

سوال نمبر 1: درست جواب پر دائرہ کا نشان لگائیں۔

|  |   |  |  |
|--|---|--|--|
| 1. کس نے حضرت عثمان رضی اللہ تعالیٰ عنہ کو اسلام کی دعوت دی؟   |   |  |  |
| <input type="radio"/> حضرت عبد الرحمن بن عوف رضی اللہ تعالیٰ عنہ                                       | <input type="radio"/> حضرت ابو بکر صدیق رضی اللہ تعالیٰ عنہ | <input type="radio"/> حضرت عمر فاروق رضی اللہ تعالیٰ عنہ | <input type="radio"/> حضرت علی رضی اللہ تعالیٰ عنہ |
| 2. اللہ تعالیٰ نے کس کو شیطان کا بھائی قرار دیا ہے؟  |   |  |  |
| <input type="radio"/> جھوٹے کو   | <input type="radio"/> بدکار کو                              | <input type="radio"/> فضول خرچ کو                        | <input type="radio"/> بد عہد کو                    |
| 3. بدر کی لڑائی میں کتنے کافر مارے گئے؟  |   |  |  |
| <input type="radio"/> 14   | <input type="radio"/> 55                                    | <input type="radio"/> 70                                 | <input type="radio"/> 95                           |
| 4. نماز جمعہ کس وقت ادا کی جاتی ہے؟  |   |  |  |
| <input type="radio"/> فجر کے وقت   | <input type="radio"/> ظہر کے وقت                            | <input type="radio"/> عصر کے وقت                         | <input type="radio"/> مغرب اور عشاء کے درمیان      |
| 5. عید الفطر کب منائی جاتی ہے؟   |   |  |  |
| <input type="radio"/> یکم شعبان  | <input type="radio"/> یکم شوال                              | <input type="radio"/> یکم رمضان                          | <input type="radio"/> دس ذوالحج                    |
| 6. حضرت عثمان غنی رضی اللہ تعالیٰ عنہ کا نسب کون سی پشت میں رسول اللہ صلی اللہ علیہ وسلم سے جاملتا ہے؟ |   |  |  |
| <input type="radio"/> دوسری  | <input type="radio"/> تیسری                                 | <input type="radio"/> چوتھی                              | <input type="radio"/> پانچویں                      |
| 7. غزوہ احد میں کفار کے لشکر کی تعداد کتنی تھی؟  |   |  |  |
| <input type="radio"/> ایک ہزار   | <input type="radio"/> دو ہزار                               | <input type="radio"/> تین ہزار                           | <input type="radio"/> چار ہزار                     |
| 8. خلیفہ منتخب ہونے کے وقت حضرت عثمان رضی اللہ تعالیٰ عنہ کی عمر کتنی تھی؟                             |   |  |  |
| <input type="radio"/> 60   | <input type="radio"/> 65                                    | <input type="radio"/> 70                                 | <input type="radio"/> 75                           |

|  |  |  |   |
|--|--|--|---|
| 9 فضول خرچ انسان آخر کار کس میں مبتلا ہو جاتا ہے؟                          |  |  |   |
| <input type="radio"/> خوشحالی میں  | <input type="radio"/> مالی تنگی میں                          | <input type="radio"/> مالی فراخی میں                           | <input type="radio"/> ذہنی دباؤ میں                             |
| 10 کون سا انسان تنگ دست نہیں ہوتا؟   |  |  |   |
| <input type="radio"/> کنجوسی کرنے والا                                     | <input type="radio"/> فضول خرچی کرنے والا                    | <input type="radio"/> میانہ روی اختیار کرنے والا               | <input type="radio"/> عیاشی کرنے والا                           |
| 11 رسول اللہ صلی اللہ علیہ والہ وسلم نے کس صحابی کے مشورے سے خندق کھودی؟   |  |  |   |
| <input type="radio"/> حضرت سلیمان فارسی رضی اللہ تعالیٰ عنہ                | <input type="radio"/> حضرت زید بن حارث رضی اللہ تعالیٰ عنہ   | <input type="radio"/> حضرت بلال حبشی رضی اللہ تعالیٰ عنہ       | <input type="radio"/> حضرت عبدالرحمن بن عوف رضی اللہ تعالیٰ عنہ |
| 12 عرب قبائل نہیں کب تیزی سے اسلام قبول کرنا شروع کیا؟                     |  |  |   |
| <input type="radio"/> غزوہ بدر کے بعد                                      | <input type="radio"/> غزوہ احد کے بعد                        | <input type="radio"/> غزوہ خندق کے بعد                         | <input type="radio"/> غزوہ تبوک کے بعد                          |
| 13 درے پر کس صحابی کی قیادت میں تیراندازوں کا دستہ مقرر کیا؟               |  |  |   |
| <input type="radio"/> حضرت حمزہ رضی اللہ تعالیٰ عنہ                        | <input type="radio"/> حضرت زبیر رضی اللہ تعالیٰ عنہ          | <input type="radio"/> حضرت علی رضی اللہ تعالیٰ عنہ             | <input type="radio"/> حضرت عبداللہ بن جبیر رضی اللہ تعالیٰ عنہ  |
| 14 رسول اللہ صلی اللہ علیہ وسلم کے ہم شکل کون سے صحابی تھے؟                |  |  |   |
| <input type="radio"/> حضرت کعب بن مالک رضی اللہ تعالیٰ عنہ                 | <input type="radio"/> حضرت موسیٰ بن عمیر رضی اللہ تعالیٰ عنہ | <input type="radio"/> حضرت سعد بن ابی وقاص رضی اللہ تعالیٰ عنہ | <input type="radio"/> حضرت عبداللہ بن عمر رضی اللہ تعالیٰ عنہ   |
| 15 دو نو عمر مجاہدوں معاذ اور معوذ رضی اللہ تعالیٰ عنہما نے کس کو قتل کیا؟ |  |  |   |
| <input type="radio"/> ابو جہل  | <input type="radio"/> عقبہ                                   | <input type="radio"/> شیبہ                                     | <input type="radio"/> ولید                                      |
| 16 لیلۃ القدر میں عبادت کا ثواب کتنے مہینے کی عبادت سے بھی زیادہ ہے؟       |  |  |   |
| <input type="radio"/> ایک ہزار   | <input type="radio"/> دو ہزار                                | <input type="radio"/> تین ہزار                                 | <input type="radio"/> چار ہزار                                  |
| 17 روزہ رکھنے سے دوسروں کے ساتھ کس طرح کا جذبہ اجاگر ہوتا ہے؟              |  |  |   |
| <input type="radio"/> ہمدردی کا  | <input type="radio"/> دشمنی کا                               | <input type="radio"/> حقارت کا                                 | <input type="radio"/> حسد کا                                    |
| 18 نماز جمعہ میں کتنے فرض رکعات ہوتی ہیں؟                                  |  |  |   |
| <input type="radio"/> دو   | <input type="radio"/> تین                                    | <input type="radio"/> چار                                      | <input type="radio"/> پچھ                                       |

1. . جماعی عبادت کا کیا مقصد ہے؟
2. روزے کا مفہوم تحریر کریں؟
3. نبی کریم صلی اللہ علیہ وسلم نے بدر کے قیدیوں کے ساتھ کیسا برتاؤ کیا؟
4. . کفایت شعاری کے مفہوم کی وضاحت کریں؟
5. غزوہ احد میں مسلمان خواتین نے کیا کیا کام انجام دیے؟
6. یثاق مدینہ کی خلاف ورزی کرنے پر رسول صلی اللہ علیہ وسلم نے یہودیوں کے کن قبائل کو جلا وطن کیا؟
7. بخل کیا ہے؟ اس کی وضاحت کریں؟
8. غزوہ بدر کی فوری وجہ کیا تھی؟
9. حضرت عثمان غنی رضی اللہ تعالیٰ عنہ کے قبول اسلام کا واقعہ لکھیں؟
10. روزے کی فرضیت کے بارے میں اللہ تعالیٰ کا کیا حکم ہے؟

سوال 3: مندرجہ ذیل سوالات کا تفصیلی جواب دیں:

1. حضرت عثمان غنی رضی اللہ تعالیٰ عنہ کی اسلامی خدمات بیان کریں؟
2. کفایت شعاری کے تین فوائد تحریر کریں؟
3. غزوہ خندق کے تین نتائج تحریر کریں؟
4. غزوہ بدر کے اسباب تحریر کریں؟
5. عیدین کی معاشرتی اہمیت تحریر کریں؟
6. روزے کے فوائد تحریر کریں؟
7. عیدین کے چند آداب لکھیں؟


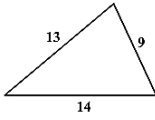




**Pakistan International School, Al Azizia, Jeddah**  
**Federal Junior Section 2023 - 2024**  
**Review Worksheet**

**Subject: Mathematics**

**Class: V**

**Q. 1: Encircle the correct option A, B, C or D in the box next to each question.**

|  |                       |                     |                         |
|--|-----------------------|---------------------|-------------------------|
| <b>1. The price of 30 cups is Rs 900. What will be the price of one cup.</b>   |                       |                     |                         |
| <b>A. Rs 300</b>   | <b>B. Rs 3</b>        | <b>C. Rs 30</b>     | <b>D. Rs 60</b>         |
| <b>2. Two angles are said to be complimentary angles if the sum of both the angles is:</b>   |                       |                     |                         |
| <b>A. 180°</b>   | <b>B. 270°</b>        | <b>C. 90°</b>       | <b>D. 360°</b>          |
| <b>3. Identify the following quadrilateral:</b>                     |                       |                     |                         |
| <b>A. rectangle</b>  | <b>B. kite</b>        | <b>C. rhombus</b>   | <b>D. parallelogram</b> |
| <b>4. Which one of the following is reflex angle:</b>  |                       |                     |                         |
| <b>A. 90°</b>  | <b>B. 180°</b>        | <b>C. 270°</b>      | <b>D. 150°</b>          |
| <b>5. Identify the following triangle with respect to sides:</b>  |                       |                     |                         |
| <b>A. scalene</b>  | <b>B. equilateral</b> | <b>C. isosceles</b> | <b>D. right angle</b>   |
| <b>6. How many triangular faces a pyramid has?</b>   |                       |                     |                         |
| <b>A. 4</b>  | <b>B. 5</b>           | <b>C. 6</b>         | <b>D. 7</b>             |
| <b>7. If the price of one notebook is Rs 60, what will be the price of 7 notebooks?</b>  |                       |                     |                         |
| <b>A. 420</b>  | <b>B. 400</b>         | <b>C. 360</b>       | <b>D. 530</b>           |
| <b>8. Which angle is this shape representing?</b>                 |                       |                     |                         |
| <b>A. Obtuse</b>   | <b>B. Acute</b>       | <b>C. Reflex</b>    | <b>D. Straight</b>      |
| <b>9. Identify the following 3-D shape</b>                        |                       |                     |                         |
| <b>A. Cone</b>   | <b>B. cuboid</b>      | <b>C. cylinder</b>  | <b>D. Pyramid</b>       |
| <b>10. _____ is a 3-D shape having 6 faces, 12 edges and 8 vertices</b>  |                       |                     |                         |
| <b>A. Pyramid</b>  | <b>B. Cone</b>        | <b>C. cuboid</b>    | <b>D. Cylinder</b>      |

**Q. 2: Solve the following questions:**

1. If the price of 6 bananas is Rs 36. Find the cost of one dozen bananas.
2. Construct the following angles with the help of protractor.  
i)  $65^\circ$  ii)  $145^\circ$  iii)  $230^\circ$

3. Construct a rectangle with length= 6.5cm, width = 3cm with the help of protractor and scale.

4. Draw possible lines of symmetry of the given shape:

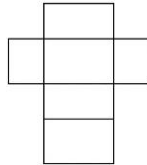


5. Use protractor and ruler to construct a triangle BCD measuring  $m\angle C = 30^\circ$  and  $m\angle D = 45^\circ$ . Also write steps of construction.

6. Use protractor and ruler to construct an equilateral triangle ABC measuring  $m\overline{AB} = 6\text{cm}$ ,  $m\angle A = 60^\circ$  and  $m\angle B = 60^\circ$ . Also write steps of construction.

7. A train takes 8 hours to cover 560km. How much distance will it cover in 13 hours?

8. Write name of 3-D shapes formed by joining this net:



9. Construct a square having length of side 5cm. Also write steps of construction.

10. Shahbaz is working in a multinational garment factory. The company pays him Rs 1.75 for stitching each piece of pant. If he stitches 536 pieces in a day, how much money will Shahbaz receive at the end of the day?

Note: Show working with questions where required

*Best of Luck*

\*\*\*\*\*



## حفظ سورة الزلزلة

بِسْمِ اللّٰهِ الرَّحْمٰنِ الرَّحِیْمِ ۝

اِذَا زُلْزِلَتِ الْاَرْضُ زِلْزَالَهَا ۝ ۱ ۝ وَاَخْرَجَتِ الْاَرْضُ

منزل ۷

Ikha Ikha Meem Saakin Qalqala Qalb Idghaam Idghaam Meem Saakin Ghun

30 عَمَّ ۳۰ 844 ۸۴۴ 100 اَلْعَدِیْتُ ۱۰۰

اَنْتَقَالَهَا ۝ ۱ ۝ وَقَالَ الْاِنْسَانُ مَا لَهَا ۝ ۲ ۝ یَوْمَیْنِیْ تَحْدِثُ

اَخْبَارَهَا ۝ ۳ ۝ بِاَنَّ رَبَّكَ اَوْحٰی لَهَا ۝ ۴ ۝ یَوْمَیْنِیْ یَصُدُّ رُتَّاسُ

اَشْتَاتَا ۝ ۵ ۝ لِّیُرَوْا اَعْمَالَهُمْ ۝ ۶ ۝ فَمَنْ یَّعْمَلْ مِثْقَالَ ذَرَّةٍ

خَیْرًا یَّرَهُ ۝ ۷ ۝ وَمَنْ یَّعْمَلْ مِثْقَالَ ذَرَّةٍ شَرًّا یَّرَهُ ۝ ۸ ۝

# سورة البينة

آيَاتُهَا ٨

(٩٨) سُورَةُ الْبَيِّنَاتِ مَكِّيَّةٌ (١٠٠)

رُكُوعُهَا ١

بِسْمِ اللَّهِ الرَّحْمَنِ الرَّحِيمِ

لَمْ يَكُنِ الَّذِينَ كَفَرُوا مِنْ أَهْلِ الْكِتَابِ وَالْبَشَرِ كَيْنَ مُنْفَكِينَ  
حَتَّى تَأْتِيَهُمُ الْبَيِّنَةُ ۝١ رَسُولٌ مِّنَ اللَّهِ يَتْلُوا صُحُفًا مُّطَهَّرَةً ۝٢  
فِيهَا كُتِبَ قَيِّمَةٌ ۝٣ وَمَا تَفَرَّقَ الَّذِينَ أُوتُوا الْكِتَابَ إِلَّا مِنْ  
بَعْدِ مَا جَاءَ تَهُمُ الْبَيِّنَةُ ۝٤ وَمَا أُمِرُوا إِلَّا لِيَعْبُدُوا اللَّهَ  
مُخْلِصِينَ لَهُ الدِّينَ ۝٥ حُنَفَاءَ وَيُقِيمُوا الصَّلَاةَ وَيُؤْتُوا الزَّكَاةَ  
وَذَلِكَ دِينُ الْقَيِّمَةِ ۝٦ إِنَّ الَّذِينَ كَفَرُوا مِنْ أَهْلِ الْكِتَابِ  
وَالْبَشَرِ كَيْنَ فِي نَارِ جَهَنَّمَ خَالِدِينَ فِيهَا ۝٧ أُولَئِكَ هُمْ شَرُّ الْبَرِيَّةِ ۝٨  
إِنَّ الَّذِينَ آمَنُوا وَعَمِلُوا الصَّالِحَاتِ ۝٩ أُولَئِكَ هُمْ خَيْرُ الْبَرِيَّةِ ۝١٠  
جَزَاءُ وَّهُمْ عِنْدَ رَبِّهِمْ جَدَّتْ ۝١١ عَدْنٍ تَجْرِي مِنْ تَحْتِهَا الْأَنْهَارُ خَالِدِينَ  
فِيهَا أَبَدًا ۝١٢ رَضِيَ اللَّهُ عَنْهُمْ وَرَضُوا عَنْهُ ۝١٣ ذَلِكَ لِمَنْ خَشِيَ رَبَّهُ ۝١٤

# تیسرا کلمہ

Third Kalima Tajweed

سُبْحَانَ اللَّهِ وَالْحَمْدُ لِلَّهِ وَلَا إِلَهَ إِلَّا اللَّهُ وَاللَّهُ أَكْبَرُ  
وَلَا حَوْلَ وَلَا قُوَّةَ إِلَّا بِاللَّهِ الْعَلِيِّ الْعَظِيمِ



اللہ پاک ہے اور سب تعریف اللہ کے لئے ہے اور اللہ کے سوا کوئی معبود نہیں  
اور اللہ بہت بڑا ہے گناہوں سے بچنے کی طاقت اور نیک کام کرنے کی  
توفیق نہیں مگر اللہ کی طرف سے جو بہت بلند عظمت والا ہے۔

Glory be to ALLAH and all praise be to ALLAH and there is none  
worthy of worship except ALLAH, and ALLAH is the Greatest.  
And there is no might or power except with ALLAH,  
the Exalted, the Great One.

◆ BOLD READ

◆ GHUNNAH

◆ QALQALA

◆ MAK 1.280 x 720

## 4th Kalima (Tauheed)

لَا إِلَهَ إِلَّا اللَّهُ وَحْدَهُ لَا شَرِيكَ لَهُ لَهُ الْمُلْكُ وَ لَهُ الْحَمْدُ يُحْيِي  
وَيُمِيتُ وَهُوَ حَيٌّ لَا يَمُوتُ أَبَدًا أَبَدًا ذُو الْجَلَالِ وَالْإِكْرَامِ  
بِيَدِهِ الْخَيْرُ وَهُوَ عَلَى كُلِّ شَيْءٍ قَدِيرٌ

La ilaha illallah wahdahu la sharika lahu, lahul mulku wa lahul  
hamdu yuhyi wa yumitu Wahuwa Hayyu-l Laa Yamootu Abadan  
Abada. Dhul Jalaali Wal Ikraam. Biyadihil Khair. Wahuwa Ala Kulli  
Shai-in Qadeer

*“There is none worthy of worship except Allah. He is alone and  
has no partner. To Him belongs the Kingdom and for Him is all  
praise. He gives life and causes death. In His hand is all good  
and He has power over everything”.*


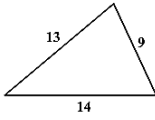




**Pakistan International School, Al Azizia, Jeddah**  
**Federal Junior Section 2023 - 2024**  
**Review Worksheet**

**Subject: Mathematics**

**Class: V**

**Q. 1: Encircle the correct option A, B, C or D in the box next to each question.**

|  |                       |                     |                         |
|--|-----------------------|---------------------|-------------------------|
| <b>1. The price of 30 cups is Rs 900. What will be the price of one cup.</b>   |                       |                     |                         |
| <b>A. Rs 300</b>   | <b>B. Rs 3</b>        | <b>C. Rs 30</b>     | <b>D. Rs 60</b>         |
| <b>2. Two angles are said to be complimentary angles if the sum of both the angles is:</b>   |                       |                     |                         |
| <b>A. 180°</b>   | <b>B. 270°</b>        | <b>C. 90°</b>       | <b>D. 360°</b>          |
| <b>3. Identify the following quadrilateral:</b>                     |                       |                     |                         |
| <b>A. rectangle</b>  | <b>B. kite</b>        | <b>C. rhombus</b>   | <b>D. parallelogram</b> |
| <b>4. Which one of the following is reflex angle:</b>  |                       |                     |                         |
| <b>A. 90°</b>  | <b>B. 180°</b>        | <b>C. 270°</b>      | <b>D. 150°</b>          |
| <b>5. Identify the following triangle with respect to sides:</b>  |                       |                     |                         |
| <b>A. scalene</b>  | <b>B. equilateral</b> | <b>C. isosceles</b> | <b>D. right angle</b>   |
| <b>6. How many triangular faces a pyramid has?</b>   |                       |                     |                         |
| <b>A. 4</b>  | <b>B. 5</b>           | <b>C. 6</b>         | <b>D. 7</b>             |
| <b>7. If the price of one notebook is Rs 60, what will be the price of 7 notebooks?</b>  |                       |                     |                         |
| <b>A. 420</b>  | <b>B. 400</b>         | <b>C. 360</b>       | <b>D. 530</b>           |
| <b>8. Which angle is this shape representing?</b>                 |                       |                     |                         |
| <b>A. Obtuse</b>   | <b>B. Acute</b>       | <b>C. Reflex</b>    | <b>D. Straight</b>      |
| <b>9. Identify the following 3-D shape</b>                        |                       |                     |                         |
| <b>A. Cone</b>   | <b>B. cuboid</b>      | <b>C. cylinder</b>  | <b>D. Pyramid</b>       |
| <b>10. _____ is a 3-D shape having 6 faces, 12 edges and 8 vertices</b>  |                       |                     |                         |
| <b>A. Pyramid</b>  | <b>B. Cone</b>        | <b>C. cuboid</b>    | <b>D. Cylinder</b>      |

**Q. 2: Solve the following questions:**

1. If the price of 6 bananas is Rs 36. Find the cost of one dozen bananas.
2. Construct the following angles with the help of protractor.  
i)  $65^\circ$  ii)  $145^\circ$  iii)  $230^\circ$

3. Construct a rectangle with length= 6.5cm, width = 3cm with the help of protractor and scale.

4. Draw possible lines of symmetry of the given shape:

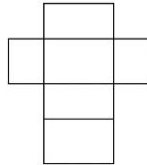


5. Use protractor and ruler to construct a triangle BCD measuring  $m\angle C = 30^\circ$  and  $m\angle D = 45^\circ$ . Also write steps of construction.

6. Use protractor and ruler to construct an equilateral triangle ABC measuring  $m\overline{AB} = 6\text{cm}$ ,  $m\angle A = 60^\circ$  and  $m\angle B = 60^\circ$ . Also write steps of construction.

7. A train takes 8 hours to cover 560km. How much distance will it cover in 13 hours?

8. Write name of 3-D shapes formed by joining this net:



9. Construct a square having length of side 5cm. Also write steps of construction.

10. Shahbaz is working in a multinational garment factory. The company pays him Rs 1.75 for stitching each piece of pant. If he stitches 536 pieces in a day, how much money will Shahbaz receive at the end of the day?

Note: Show working with questions where required

*Best of Luck*

\*\*\*\*\*



**Pakistan International School, Al Aziziya, Jeddah**  
**Federal Junior Section 2023 - 2024**  
**Review Sheet for winter holidays homework**

Subject: Science

Class: V

**Section A**

**Q. 1: Encircle the correct option A, B, C or D in the box next to each question.**

|  |  |   |  |
|--|--|---|--|
| 1. Germinating seed need a continuous supply of:                         |  |   |  |
| <input type="radio"/> Oxygen   | <input type="radio"/> water                | <input type="radio"/> Carbon dioxide                | <input type="radio"/> Nitrogen             |
| 2. When the seed coat in monocot seeds splits, radicle emerges and grows |  |   |  |
| <input type="radio"/> Upward   | <input type="radio"/> Downward             | <input type="radio"/> Perpendicular to the Sunlight | <input type="radio"/> parallel to the soil |
| 3. Intensity of sound depends upon :                                     |  |   |  |
| <input type="radio"/> Amplitude  | <input type="radio"/> Distance from source | <input type="radio"/> Both of them                  | <input type="radio"/> None of them         |
| 4. What is the amplitude of a bus horn?                                  |  |   |  |
| <input type="radio"/> Low  | <input type="radio"/> Medium               | <input type="radio"/> High                          | <input type="radio"/> zero                 |
| 5. Cross pollination takes place by:                                     |  |   |  |
| <input type="radio"/> wind   | <input type="radio"/> birds                | <input type="radio"/> insects                       | <input type="radio"/> All of above         |
| 6. which one is translucent object                                       |  |   |  |
| <input type="radio"/> wood   | <input type="radio"/> Gold                 | <input type="radio"/> cardboard                     | <input type="radio"/> butter paper         |
| 7. The food storage part in monocot seed is                              |  |   |  |
| <input type="radio"/> Embryo   | <input type="radio"/> Radicle              | <input type="radio"/> Endosperm                     | <input type="radio"/> plumule              |
| 8. Sometimes light comes back when it falls on a surface. This is called |  |   |  |
| <input type="radio"/> Reflection   | <input type="radio"/> Image                | <input type="radio"/> Shadow                        | <input type="radio"/> Vibration            |
| 9. The first leaves in dicot seeds develop into:                         |  |   |  |
| <input type="radio"/> Shoot  | <input type="radio"/> Root                 | <input type="radio"/> leaves                        | <input type="radio"/> Flower               |
| 10. Speed of sound is fastest in:  |  |   |  |
| <input type="radio"/> solids   | <input type="radio"/> liquids              | <input type="radio"/> gases                         | <input type="radio"/> vacuum               |
| 11. When the light source gets closer to the object, the shadow will be: |  |   |  |
| <input type="radio"/> smaller  | <input type="radio"/> bigger               | <input type="radio"/> Of the same size              | <input type="radio"/> disappeared          |

|   |                            |                            |                               |
|---|----------------------------|----------------------------|-------------------------------|
| 12. The product of fertilization in flowering plants is : |                            |                            |                               |
| <input type="radio"/> plumule                             | <input type="radio"/> seed | <input type="radio"/> stem | <input type="radio"/> radical |

---

**Section B**

**Q. 2: Answer the following questions. (Short Answers)**

1. Describe the structure of monocot seeds.
2. How do different kinds of materials such as solids, liquids and gases affect the intensity of sound?
3. How do runner plants reproduce?
4. Why do the length and size of the shadow differ at different times of the day?
5. What is the reason that sound cannot travel in a vacuum?
6. What is noise? How badly noise affect the humans?
7. Differentiate between regular and diffused reflection.
8. Define the function of endosperm in monocot seed.

**Section C**

**Q. 3: Answer the Following Question. (Long Answer)**

1. Explain with the help of suitable diagram that the movement of the light source varies the location of a shadow.
2. What is pollination? Differentiate between self-pollination and cross pollination.
3. Describe the germination of chickpea seed and maize seed.
4. Prove that germination will not be possible without sunlight.
5. Write a comprehensive note on luminous and non luminous objects with suitable examples.

\*\*\*\*\*





# Pakistan International School Jeddah

## Federal Junior Section

### Winter Vacation Holiday (2023-2024)

Class/ Sec: V      Subject: Social Studies      Name: \_\_\_\_\_

#### Q1: Choose the Correct answer:

|  |                         |                        |                        |
|--|-------------------------|------------------------|------------------------|
| 1. Marco Polo spent _____ years in China.  |                         |                        |                        |
| 1-20   | 2-17                    | 3- 25                  | 4- 15                  |
| 2. _____ is the act of investigating unfamiliar places?  |                         |                        |                        |
| 1- Examination   | 2- Invitation           | 3- Exploration         | 4- Exhibition          |
| 3. What is the name of Ibn Batuta's book?  |                         |                        |                        |
| 1- Travels of Marco Polo   | 2- Rihla                | 3- NASA                | 4- Inuit               |
| 4. _____ is known as the ship of the desert.   |                         |                        |                        |
| 1- Ox  | 2- Camel                | 3- Buffalo             | 4- Horse               |
| 5. What is the name given to the important period of ocean going period?                       |                         |                        |                        |
| 1- The Age of Exploration  | 2- The Age of Discovery | 3-The Age of Invention | 4-The Age of Detection |
| 6. Vasco Da Gama was from _____.   |                         |                        |                        |
| 1- Portugal.   | 2- India                | 3- France              | 4- America             |
| 7. _____ is a special condition caused by extreme cold affecting the hands & feet.             |                         |                        |                        |
| 1- Cold  | 2- Anemia               | 3- Frostbite           | 4- Shivering           |
| 8. Seals, whales, polar bears and penguins are some of the animals found in the _____ Regions. |                         |                        |                        |
| 1- South   | 2- North                | 3- Polar               | 4- Cold                |
| 9. People of the Arctic are called _____.  |                         |                        |                        |
| 1- Eskimos   | 2- Nomad                | 3- Sami                | 4- Inuit               |
| 5. Marco Polo's father was a _____.  |                         |                        |                        |
| 1- Explorer  | 2- merchant             | 3- Artisan             | 4- Scholar             |

**Q2: Read the statements carefully and write “T” for True / “F” for False:**

1. Pakistan shares borders with 8 other countries.
2. The capital city of India is Kabul.
3. Pakistan is situated in the continent of Asia.
4. Staple food of Bangladesh and China is rice.
5. Deserts plants have few leaves and thick fleshy stems.

**Q3: Match the Column:**

| Column -A      | Column-B     |
|----------------|--------------|
| Neil Armstrong | merchant     |
| Ibn-Batuta     | A millennium |
| Antarctica     | Rihla        |
| Marco Polo     | Moon         |
| 1000 years     | Uninhabited  |

**Q4: Write the answers of following question in “One -Word”.**

**Q1: What is the full form of “OIC”?**

**Q2: Who was the first Greek explorer to reach the Arctic?**

**Q3: What is the name of Ibn-e-Battuta’s book?**

**Q4: Where is the Gobi Desert situated?**

**Q5: Which country shares the longest border with Pakistan?**

**Q5: Write the short answers of following question.**

**Q1: What makes Punjab the best farming area in Pakistan?**

**Q2: Why are equatorial forests important?**

**Q3: Name the countries that share a border with Pakistan?**

**Q4: How much of our arable land is under irrigation?**

**Q5: What are continental deserts? How are they formed?**

**Q6: Why is livestock an important part of agriculture?**

**Q7: Between which lines of latitude and longitude is Pakistan situated?**

**Q8: Why has the Antarctic region not been inhabited?**

**Q9: What is meant by interdependence?**

**Q10: Why is the population of desert regions so low?**

**Q6: Write the answers of following question in detail.**

**Q1: Why is there a need for interdependence?**

**Q2: Differentiate between a cash crop and a food crop. Give examples of each.**

**Q3: What are the two Polar Regions called? Differentiate between them.**

**Q4: What are some of the reasons why people explore?**

**Q5: Describe some of the different ways in which farmers irrigate their land.**

\*\*\*\*\*



**Pakistan International School, Al Azizia, Jeddah**  
**Federal Junior Section 2023 - 2024**  
**Winter Vacation Task**

**Subject: Islamic Studies**

**Class: V**

**Total Marks: 25**

**Name: \_\_\_\_\_**

**Section: \_\_\_\_\_**

**Section A**

**Q. 1: Encircle the correct option A, B, C or D in the box next to each question.**

**(6)**

|   |                                |                                       |                            |
|---|--------------------------------|---------------------------------------|----------------------------|
| 1. A Muslim can learn punctuality through _____               |                                |                                       |                            |
| <input type="radio"/> salah                                   | <input type="radio"/> lectures | <input type="radio"/> zakah           | <input type="radio"/> None |
| 2. A punctual man can earn _____                              |                                |                                       |                            |
| <input type="radio"/> fame                                    | <input type="radio"/> wealth   | <input type="radio"/> success in life | <input type="radio"/> None |
| 3. Ibrahim (AS) had _____ sons.                               |                                |                                       |                            |
| <input type="radio"/> two                                     | <input type="radio"/> twelve   | <input type="radio"/> one             | <input type="radio"/> None |
| 3. Ismail (AS) is the father of _____                         |                                |                                       |                            |
| <input type="radio"/> the Arabs                               | <input type="radio"/> the Jews | <input type="radio"/> the Copts       | <input type="radio"/> None |
| 4. The Name of second wife of Prophet Ibrahim (AS) was _____. |                                |                                       |                            |
| <input type="radio"/> Hajar                                   | <input type="radio"/> Sarah    | <input type="radio"/> Khadijah        | <input type="radio"/> None |
| 5. Ibrahim (AS) related his dream to _____                    |                                |                                       |                            |
| <input type="radio"/> Ismail (AS)                             | <input type="radio"/> Hajar    | <input type="radio"/> Ishaq (AS)      | <input type="radio"/> None |

**Section B**

**Q. 2: Write short answers for the following questions.**

1. What did Ibrahim (AS) see in his dream?
2. What was the response of Ismail (AS) when his father proposed to sacrifice?
3. What was the strange thing that happened to Ibrahim (AS)?
4. What is meant by gratitude?
5. Why is Prophet Muhammad (SAWW) called the best example of character?
6. Why is patience beneficial?
7. Who is the real strong person?
8. Mention the hadith related to thankfulness.
9. others?
10. How does Allah reward the thankful Muslim?
11. Learn all the MCQs, objectives, and worksheets for Islamic Studies Units 7, 8, & 9 thoroughly.

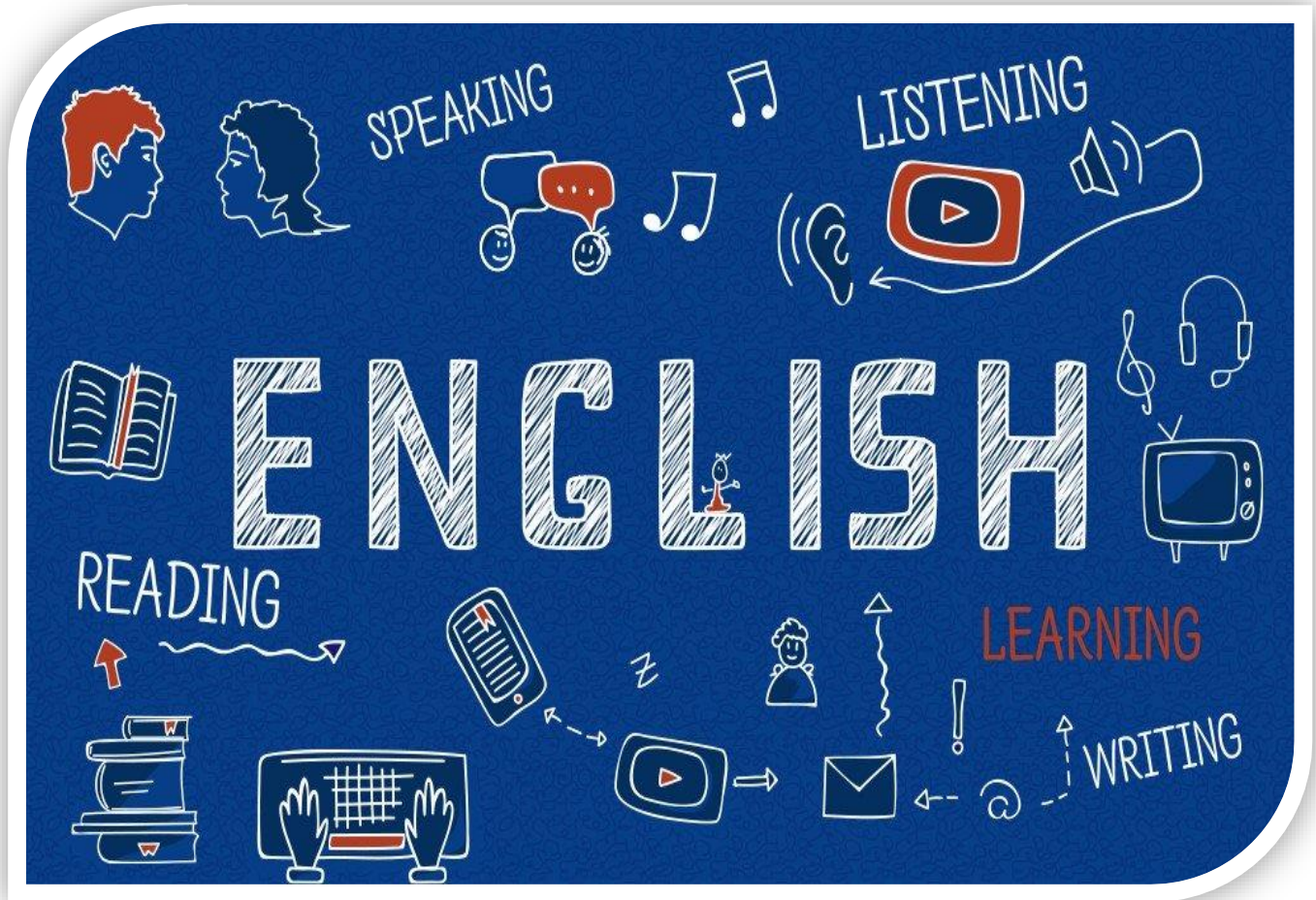
**Section c**

**Q. 2: Write long answers for the following questions.**

1. What are the benefits of respect and love in society?
2. What are some bad effects on the lives of those who are not punctual?
3. What is meant by punctuality?
4. Why do Muslims celebrate Eid al-Adha?
5. Why Ibrahim (A.S) is called 'the father of the prophets'?

\*\*\*\*\*

**Pakistan International School Jeddah**  
**FJS 2022 – 23 ENGLISH (2<sup>nd</sup> Monthly Test Resource)**



**Units included:**

- **U# 6 L# 1 – 5**
- **U# 7 L# 1 – 5**
- **U# 8 L# 1 – 3**

**Pakistan International School Jeddah**  
**FJS 2022 – 23 ENGLISH (2<sup>nd</sup> Monthly Test Resource)**

**Q# 1: Fill the circle of correct option.**

|   |  |  |   |
|---|--|--|---|
| <b>1. I am very impatient person ___ I can't wait for anything. Select a conjunction.</b>           |  |  |   |
| <input type="radio"/> because   | <input type="radio"/> so                                     | <input type="radio"/> as                                   | <input type="radio"/> but                                   |
| <b>2. Koshi tried to get into the village, _____ the knight killed it.</b>                          |  |  |   |
| <input type="radio"/> but   | <input type="radio"/> if                                     | <input type="radio"/> and                                  | <input type="radio"/> when                                  |
| <b>3. A _____ is a spiral wind that travels very fast over land and sea.</b>                        |  |  |   |
| <input type="radio"/> snowstorm   | <input type="radio"/> tornado                                | <input type="radio"/> blizzard                             | <input type="radio"/> thunderstorm                          |
| <b>4. Choose the correct punctuation of: i'd love to be an explorer</b>                             |  |  |   |
| <input type="radio"/> 'i'd love to be an explorer,' he said.  | <input type="radio"/> 'i'd love to be an explorer', he said. | <input type="radio"/> 'i'd love to be an explorer' he said | <input type="radio"/> 'i'd love to be an explorer,' he said |
| <b>5. The pharaoh's body _____ in salty crystals.</b>   |  |  |   |
| <input type="radio"/> Was stuffed   | <input type="radio"/> Was covered                            | <input type="radio"/> Was enclosed                         | <input type="radio"/> Was wrapped                           |
| <b>6. A slave who fought against wild animals in an amphitheater is known as</b>                    |  |  |   |
| <input type="radio"/> Fighter   | <input type="radio"/> Wrestler                               | <input type="radio"/> gladiator                            | <input type="radio"/> hunter                                |
| <b>7. 'It was the most beautiful thing I had ever seen!' said Ana. Select the correct category.</b> |  |  |   |
| <input type="radio"/> A Fact  | <input type="radio"/> An Opinion                             | <input type="radio"/> A Headline                           | <input type="radio"/> A quotation                           |
| <b>8. 'Why did you do that?' match the correct emotion</b>  |  |  |   |
| <input type="radio"/> angry   | <input type="radio"/> Excited                                | <input type="radio"/> Impatient                            | <input type="radio"/> worried                               |
| <b>9. If you are _____, you don't mind waiting for people.</b>                                      |  |  |   |
| <input type="radio"/> excited   | <input type="radio"/> Impatient                              | <input type="radio"/> patient                              | <input type="radio"/> angry                                 |
| <b>10. What does a body of a person that has been preserved and took 3 months to do known as?</b>   |  |  |   |
| <input type="radio"/> canopy  | <input type="radio"/> gladiator                              | <input type="radio"/> mummy                                | <input type="radio"/> hieroglyphic                          |



**Pakistan International School Jeddah**  
**FJS 2022 – 23 ENGLISH (2<sup>nd</sup> Monthly Test Resource)**

**Q# 2: Answer any three of the following questions.**

1. Find the correct adjective for eyes, face, finger, eyebrows, nose from the following  
Hawked, moon-like, winged, hooded, pudgy
2. Write down the synonyms of following words: courageous, strong, frightening, danger
3. Write the following numbers in Roman numerals: 17, 115, 1550, 23
4. Use prefixes to make negative of following adjectives: fair, honest, responsible, friendly
5. Write definition on hieroglyphic, pharaoh, pyramid Roman numerals
6. Change the sentences to the past simple or past simple passive.
  - a. The plates and bowls were used by the Romans 2000 years ago.
  - b. Archeologists discovered the site in central London.
7. Complete the sentences from the key words given: severe, torrential, heavy, violent
  - a. A blizzard is a \_\_\_\_\_ storm
  - b. When a river overflows \_\_\_\_\_ flooding can take place.
  - c. \_\_\_\_\_ rain can cause flooding.
  - d. A typhoon is a \_\_\_\_\_ storm.
8. Complete sentences with past simple and past continuous form of verbs given in brackets.
  - a. The wind \_\_\_\_ (blow) the newspaper out of mum's hand as dad \_\_\_\_\_ (swim) in the sea.
  - b. Mum \_\_\_\_\_ (feed) the baby when she \_\_\_\_\_ (see) a shadow in the corridor.

**Q# 3: Answer any one of the Following Question.**

- Write a story with a moral 'Many hands make light work'
- Write a **short anecdote** on any one of the following situation  
A scary experience, a holiday adventure, a school trip
- Complete these **facts about a rainforest animal** of your choice  
(Name, location, appearance, diet, behavior, curious fact)
- Write about **an extreme weather situation** you have experienced in your country.  
(describe type of weather, how long did it last? what did you do? how did you feel?)

\*\*\*\*\*



**Pakistan International School, Al Azizia, Jeddah**  
**Federal Junior Section 2023 - 2024**  
**Winter Vacation Work**

**Subject: Computer**

**Class: V**

**Section A**

**Q. 1: Encircle the correct option A, B, C or D in the box next to each question.**

|  |   |  |                                       |
|--|---|--|---------------------------------------|
| 1.To print a document , click on file tab to display the—————view.                                       |   |  |                                       |
| <input type="radio"/> page setup   | <input type="radio"/> Backstage           | <input type="radio"/> page print preview | <input type="radio"/> printing        |
| 2.Compression reduces the ————— of the picture.  |   |  |                                       |
| <input type="radio"/> Brightness   | <input type="radio"/> Quality             | <input type="radio"/> Sharpness          | <input type="radio"/> Softness        |
| 3.—————can be very useful in grabbing the reader’s attention to the the specific text.                   |   |  |                                       |
| <input type="radio"/> Columns  | <input type="radio"/> Orientation         | <input type="radio"/> Margins            | <input type="radio"/> Text box        |
| 4.The page size of any new document in word is set to letter —————, by default.                          |   |  |                                       |
| <input type="radio"/> 8.5”x14”   | <input type="radio"/> 5.83”x11.69”        | <input type="radio"/> 5.83”x 8.27”       | <input type="radio"/> 8.5” x 11”      |
| 5.How many types of Orientation?   |   |  |                                       |
| <input type="radio"/> one  | <input type="radio"/> two                 | <input type="radio"/> four               | <input type="radio"/> six             |
| 6.—————Effect is used to make the picture looks more like a painting.                                    |   |  |                                       |
| <input type="radio"/> 3D   | <input type="radio"/> Color               | <input type="radio"/> 2D                 | <input type="radio"/> Artistic Effect |
| 7.Landscape gives a ————— layout to your document page.  |   |  |                                       |
| <input type="radio"/> Vertical   | <input type="radio"/> Row                 | <input type="radio"/> Horizontal         | <input type="radio"/> portrait        |
| 8.————means to cut a size from any sides to make it small and remove the unwanted area.                  |   |  |                                       |
| <input type="radio"/> wrap text  | <input type="radio"/> picture sizing      | <input type="radio"/> Crop               | <input type="radio"/> Corrections     |
| 9.————- chooses where the picture will appear on the page.   |   |  |                                       |
| <input type="radio"/> position   | <input type="radio"/> Formatting          | <input type="radio"/> Insert tab         | <input type="radio"/> Wrap text       |
| 10.————- repeat content at the bottom of every page while ————— repeat content at the top of every page. |   |  |                                       |
| <input type="radio"/> Header,Footer  | <input type="radio"/> Orientation, Margin | <input type="radio"/> Footer , Header    | <input type="radio"/> Row , Column    |

|   |                              |                                   |                                |
|---|------------------------------|-----------------------------------|--------------------------------|
| 11.A ————— is an empty area or blank space between the text and edge of the document on all the four sides. |                              |                                   |                                |
| <input type="radio"/> Header  | <input type="radio"/> Margin | <input type="radio"/> Orientation | <input type="radio"/> Text box |
| 12.How to apply a style set?  |                              |                                   |                                |

|   |  |   |                                      |
|---|--|---|--------------------------------------|
| Home tab=> Styles group   | <input type="radio"/> Insert tab => Text group | <input type="radio"/> Design tab => Document Formatting group | <input type="radio"/> None of these  |
| 13. There are different buttons that help in picture adjustments. These buttons can be found in _____ group on format tab |  |   |                                      |
| <input type="radio"/> Illustrations   | Insert   | <input type="radio"/> Adjust                                  | <input type="radio"/> Format         |
| 14. To Change to a different picture, keeping the formatting and size of the current picture. _____                       |  |   |                                      |
| <input type="radio"/> Change Picture  | <input type="radio"/> Remove Picture           | <input type="radio"/> Compress Picture                        | <input type="radio"/> None of these  |
| 15. _____ allows you to change the overall look of your picture.  |  |   |                                      |
| Picture layout  | <input type="radio"/> Picture Border           | <input type="radio"/> Quick Style Gallery                     | <input type="radio"/> Picture Effect |

## Section B

**Q. 2: Answer the following questions. (Short Answers)**

1. How do you remove formatting from a picture in word ?

Ans: \_\_\_\_\_  
 \_\_\_\_\_  
 \_\_\_\_\_

2. How to add header and footer in MS Word?

Ans: \_\_\_\_\_  
 \_\_\_\_\_  
 \_\_\_\_\_

3. Difference between Artistic effect and picture effect ?

Ans: \_\_\_\_\_  
 \_\_\_\_\_  
 \_\_\_\_\_  
 \_\_\_\_\_

4. How to add picture in MS Word ?

Ans: \_\_\_\_\_  
 \_\_\_\_\_  
 \_\_\_\_\_  
 \_\_\_\_\_  
 \_\_\_\_\_

5. Explain any three picture adjustment buttons in Adjust group on Format tab.

Ans: \_\_\_\_\_  
 \_\_\_\_\_  
 \_\_\_\_\_

---

---

---

6.How do you freely float a picture in word ?

Ans: \_\_\_\_\_  
\_\_\_\_\_  
\_\_\_\_\_  
\_\_\_\_\_  
\_\_\_\_\_

7.How to print a document ?

Ans: \_\_\_\_\_  
\_\_\_\_\_  
\_\_\_\_\_  
\_\_\_\_\_  
\_\_\_\_\_

8.What is page Orientation ? write its types.

Ans: \_\_\_\_\_  
\_\_\_\_\_  
\_\_\_\_\_  
\_\_\_\_\_  
\_\_\_\_\_  
\_\_\_\_\_

9.Define Margin ?

Ans: \_\_\_\_\_  
\_\_\_\_\_  
\_\_\_\_\_

10.what is the use of Header and footer? also write its difference .

Ans: \_\_\_\_\_  
\_\_\_\_\_  
\_\_\_\_\_  
\_\_\_\_\_  
\_\_\_\_\_  
\_\_\_\_\_

# Section C

## Q. 3: Answer the Following Question. (Long Answer)

1. Describe the ways to add a column to Documents.

Ans: \_\_\_\_\_

---

---

---

---

---

---

---

---

---

---

---

---

---

---

---

---

---

---

---

---

---

---

---

---

2. What is Text box? How to add a text box in your documents? Explain Briefly.

Ans: \_\_\_\_\_

---

---

---

---

---

---

---

---

---

---

---

---

---

---

---

---

---

---

---

---

---

---

---

---

3. Write steps to crop a picture to a shape.

Ans: \_\_\_\_\_

---

---

---

---

---

---

---

---

---

---

---

---

---

---

---

---

---

---

---

---

---

---

---

---

پاکستان انٹرنیشنل اسکول جدہ  
فیڈرل جونیئر اسکول  
(سال: 2023-24)

Class 5<sup>th</sup>

Winter Vacation work

Arabic

صحیح جواب بتائیں

اختاری الاجابة الصحيحة بوضع علامة صح

|                               |            |             |                |
|-------------------------------|------------|-------------|----------------|
| ۱:- ما معنى الكلمة مؤسس ؟     |            |             |                |
| ا:- جاتا ہے                   | ب:-باني    | ج:-آج       | د:- وہ خوش ہوا |
| ۲:- ما معنى الكلمة محامي ؟    |            |             |                |
| ا:- خاندان                    | ب:- رکھنا  | ج:- وکیل    | د:- اکثر       |
| ۳:- ما معنى الكلمة توضحا ؟ ؟  |            |             |                |
| ا- اس نے وضو کیا              | ب - طرف    | ج - واضح    | د - برش        |
| ۳:- هاتي مفرد الكلمة اشجار ؟  |            |             |                |
| ا:- شجرة                      | ب:-شجرتان  | ج:-اعشاب    | د:- يمكن       |
| ۵:- ما معنى الكلمة فرحة ؟     |            |             |                |
| ا:- پاس                       | ب:- خوشی   | ج:- طعام    | د:- الاكل      |
| ۶:-هاتي مفرد كلمة سبورات ؟    |            |             |                |
| ا:- جبلان                     | ب:-سبورة   | ج:-فواكة    | د:- ماندان     |
| 7- ما معنى الكلمة اليوم ؟     |            |             |                |
| ا بارے                        | ب مکالہ    | ج آج        | د کل           |
| 8- ما معنى الكلمة عودة ؟      |            |             |                |
| ا واپسی                       | ب چلے جانا | ج بیٹھ جانا | د مدرسة        |
| 9- هل تحبينا ان تكوني معلمه ؟ |            |             |                |
| ا لا                          | ب نعم      | ج يمكن      | د كيف          |
| 10 هاتي جمع الكلمة ثمر؟       |            |             |                |

اجيبى عن ثلاثة اسئلة

ما اسم موسس باكستان ؟

-----

متى ولد محمد على جناح ؟

-----

متى جمع الرجل ابناءه؟

-----

هل تحب ان تسافر بالقطار ؟

-----

هل تحبينا ان تكوني محامي ؟

-----

متى تستيقظ كل يوم ؟

-----

ترجمي الى العربية ؟

1 (يقرا خالد القران الكريم بعد الصلاة الفجر)

2 (سالت المعلمه التلاميذ و تلميذات الصف الخامس )

3 ( احب ان اكمل تدرستى في الجامعة )

-----  
 -----  
 -----  
 -----  
 -----



پاکستان انٹرنیشنل اسکول جدہ

## فیڈرل جوئیئر سیکشن

مضمون: اردو جماعت: پنجم موسم سرما کی تعطیلات کا کام

س 1: درست جواب کے دائرے کو پنسل سے بھریئے:

1- اللہ تعالیٰ نے قرآن مجید میں ----- کی اطاعت کا حکم دیا ہے۔

○ ماں باپ      ○ دوستوں      ○ پڑوسیوں      ○ رشتے داروں

2: شمس کا مطلب ----- ہے۔

○ چاند      ○ ستارے      ○ سورج      ○ زمین

3: تیز سے کا دھارا سے شاعر کی مراد ----- ہے۔

○ آسانشیں      ○ مشکلات      ○ خوشیاں      ○ دولت

4- سائنس دان ہونے کے ساتھ ساتھ آپ ----- اور شاعر بھی تھے۔

○ اسکالر      ○ فوجی      ○ گلوکار      ○ مصور

5: نظم میں کھینے والے کی ----- پہ گیند لگی اور بلا ہاتھ سے چھوٹ گیا۔

○ سیدھی آنکھ      ○ الٹی آنکھ      ○ ناک      ○ چہرے

6: آپ نے ابتدائی تعلیم ----- سے حاصل کی۔

○ بھوپال      ○ لکھنؤ      ○ کراچی      ○ پشاور

7: نظم ----- کے کھیل کے بارے میں ہے۔

○ ہاکی      ○ فٹ بال      ○ کرکٹ      ○ ٹینس

8- ----- ماحول کی حفاظت کے خاموش سپاہی ہیں۔



○ درخت      ○ سمندر      ○ کوڑا دان      ○ چوکی دان

9۔ پہیلیوں سے ----- کی مشق ہوتی ہے۔

○ کھیلنے      ○ دوڑنے      ○ کھانے      ○ سوچنے

10۔ درخت کی جڑیں زمین کی ----- کو روک کر رکھتی ہیں۔

○ پیداوار      ○ معدنیات      ○ شادابی      ○ مٹی

س 2: مندرجہ ذیل سوالات کے جوابات دیں:

- 1: ڈاکٹر سلیم الزمان صدیقی کب اور کہاں پیدا ہوئے؟
- 2: حضرت لقمان علیہ السلام اپنی ماں کے بارے میں کیا فرمایا کرتے تھے؟ کاپی میں نقل کیجیے۔
- 3: لطائف ہماری طبیعت پر کیا اثر ڈالتے ہیں؟
- 4: ردیف اور قافیہ کی تعریف کریں اور مثالیں دیں:
- 5: نظم کرکٹ کی شاعرہ کا نام بتائیے؟
- 6: حروفِ نداء اور حروفِ تاسف کی تعریف کریں اور مثالیں دیں:
- 7: درخت دنیا میں کب سے موجود ہیں؟
- 8: مندرجہ ذیل الفاظ کے جملے بنائیے:  
فطرت، ماحول، قابلیت، سنجیدہ، تربیت
- 9: ہماری زمین سیاروں کے جس نظام کا حصہ ہے، اسے نظام شمسی کیوں کہتے ہیں؟
- 10: بڑے بھائی کو خط لکھ کر اپنے معمولات کے بارے میں بتائیے۔

Winter Vacation Review Pack.

(2023-2024)

مضمون: اسلامیات

جماعت: پنجم

سوال نمبر 1: درست جواب پر دائرہ کا نشان لگائیں۔

|  |   |  |  |
|--|---|--|--|
| 1. کس نے حضرت عثمان رضی اللہ تعالیٰ عنہ کو اسلام کی دعوت دی؟   |   |  |  |
| <input type="radio"/> حضرت عبد الرحمن بن عوف رضی اللہ تعالیٰ عنہ                                       | <input type="radio"/> حضرت ابو بکر صدیق رضی اللہ تعالیٰ عنہ | <input type="radio"/> حضرت عمر فاروق رضی اللہ تعالیٰ عنہ | <input type="radio"/> حضرت علی رضی اللہ تعالیٰ عنہ |
| 2. اللہ تعالیٰ نے کس کو شیطان کا بھائی قرار دیا ہے؟  |   |  |  |
| <input type="radio"/> جھوٹے کو   | <input type="radio"/> بدکار کو                              | <input type="radio"/> فضول خرچ کو                        | <input type="radio"/> بد عہد کو                    |
| 3. بدر کی لڑائی میں کتنے کافر مارے گئے؟  |   |  |  |
| <input type="radio"/> 14   | <input type="radio"/> 55                                    | <input type="radio"/> 70                                 | <input type="radio"/> 95                           |
| 4. نماز جمعہ کس وقت ادا کی جاتی ہے؟  |   |  |  |
| <input type="radio"/> فجر کے وقت   | <input type="radio"/> ظہر کے وقت                            | <input type="radio"/> عصر کے وقت                         | <input type="radio"/> مغرب اور عشاء کے درمیان      |
| 5. عید الفطر کب منائی جاتی ہے؟   |   |  |  |
| <input type="radio"/> یکم شعبان  | <input type="radio"/> یکم شوال                              | <input type="radio"/> یکم رمضان                          | <input type="radio"/> دس ذوالحج                    |
| 6. حضرت عثمان غنی رضی اللہ تعالیٰ عنہ کا نسب کون سی پشت میں رسول اللہ صلی اللہ علیہ وسلم سے جاملتا ہے؟ |   |  |  |
| <input type="radio"/> دوسری  | <input type="radio"/> تیسری                                 | <input type="radio"/> چوتھی                              | <input type="radio"/> پانچویں                      |
| 7. غزوہ احد میں کفار کے لشکر کی تعداد کتنی تھی؟  |   |  |  |
| <input type="radio"/> ایک ہزار   | <input type="radio"/> دو ہزار                               | <input type="radio"/> تین ہزار                           | <input type="radio"/> چار ہزار                     |
| 8. خلیفہ منتخب ہونے کے وقت حضرت عثمان رضی اللہ تعالیٰ عنہ کی عمر کتنی تھی؟                             |   |  |  |
| <input type="radio"/> 60   | <input type="radio"/> 65                                    | <input type="radio"/> 70                                 | <input type="radio"/> 75                           |

|  |  |  |   |
|--|--|--|---|
| 9 فضول خرچ انسان آخر کار کس میں مبتلا ہو جاتا ہے؟                          |  |  |   |
| <input type="radio"/> خوشحالی میں  | <input type="radio"/> مالی تنگی میں                          | <input type="radio"/> مالی فراخی میں                           | <input type="radio"/> ذہنی دباؤ میں                             |
| 10 کون سا انسان تنگ دست نہیں ہوتا؟   |  |  |   |
| <input type="radio"/> کنجوسی کرنے والا                                     | <input type="radio"/> فضول خرچی کرنے والا                    | <input type="radio"/> میانہ روی اختیار کرنے والا               | <input type="radio"/> عیاشی کرنے والا                           |
| 11 رسول اللہ صلی اللہ علیہ والہ وسلم نے کس صحابی کے مشورے سے خندق کھودی؟   |  |  |   |
| <input type="radio"/> حضرت سلیمان فارسی رضی اللہ تعالیٰ عنہ                | <input type="radio"/> حضرت زید بن حارث رضی اللہ تعالیٰ عنہ   | <input type="radio"/> حضرت بلال حبشی رضی اللہ تعالیٰ عنہ       | <input type="radio"/> حضرت عبدالرحمن بن عوف رضی اللہ تعالیٰ عنہ |
| 12 عرب قبائل نہیں کب تیزی سے اسلام قبول کرنا شروع کیا؟                     |  |  |   |
| <input type="radio"/> غزوہ بدر کے بعد                                      | <input type="radio"/> غزوہ احد کے بعد                        | <input type="radio"/> غزوہ خندق کے بعد                         | <input type="radio"/> غزوہ تبوک کے بعد                          |
| 13 درے پر کس صحابی کی قیادت میں تیر اندازوں کا دستہ مقرر کیا؟              |  |  |   |
| <input type="radio"/> حضرت حمزہ رضی اللہ تعالیٰ عنہ                        | <input type="radio"/> حضرت زبیر رضی اللہ تعالیٰ عنہ          | <input type="radio"/> حضرت علی رضی اللہ تعالیٰ عنہ             | <input type="radio"/> حضرت عبداللہ بن جبیر رضی اللہ تعالیٰ عنہ  |
| 14 رسول اللہ صلی اللہ علیہ وسلم کے ہم شکل کون سے صحابی تھے؟                |  |  |   |
| <input type="radio"/> حضرت کعب بن مالک رضی اللہ تعالیٰ عنہ                 | <input type="radio"/> حضرت موسیٰ بن عمیر رضی اللہ تعالیٰ عنہ | <input type="radio"/> حضرت سعد بن ابی وقاص رضی اللہ تعالیٰ عنہ | <input type="radio"/> حضرت عبداللہ بن عمر رضی اللہ تعالیٰ عنہ   |
| 15 دو نو عمر مجاہدوں معاذ اور معوذ رضی اللہ تعالیٰ عنہما نے کس کو قتل کیا؟ |  |  |   |
| <input type="radio"/> ابو جہل  | <input type="radio"/> عقبہ                                   | <input type="radio"/> شیبہ                                     | <input type="radio"/> ولید                                      |
| 16 لیلۃ القدر میں عبادت کا ثواب کتنے مہینے کی عبادت سے بھی زیادہ ہے؟       |  |  |   |
| <input type="radio"/> ایک ہزار   | <input type="radio"/> دو ہزار                                | <input type="radio"/> تین ہزار                                 | <input type="radio"/> چار ہزار                                  |
| 17 روزہ رکھنے سے دوسروں کے ساتھ کس طرح کا جذبہ اجاگر ہوتا ہے؟              |  |  |   |
| <input type="radio"/> ہمدردی کا  | <input type="radio"/> دشمنی کا                               | <input type="radio"/> حقارت کا                                 | <input type="radio"/> حسد کا                                    |
| 18 نماز جمعہ میں کتنے فرض رکعات ہوتی ہیں؟                                  |  |  |   |
| <input type="radio"/> دو   | <input type="radio"/> تین                                    | <input type="radio"/> چار                                      | <input type="radio"/> پچھ                                       |

1. . جماعی عبادت کا کیا مقصد ہے؟
2. روزے کا مفہوم تحریر کریں؟
3. نبی کریم صلی اللہ علیہ وسلم نے بدر کے قیدیوں کے ساتھ کیسا برتاؤ کیا؟
4. . کفایت شعاری کے مفہوم کی وضاحت کریں؟
5. غزوہ احد میں مسلمان خواتین نے کیا کیا کام انجام دیے؟
6. یثاق مدینہ کی خلاف ورزی کرنے پر رسول صلی اللہ علیہ وسلم نے یہودیوں کے کن قبائل کو جلا وطن کیا؟
7. بخل کیا ہے؟ اس کی وضاحت کریں؟
8. غزوہ بدر کی فوری وجہ کیا تھی؟
9. حضرت عثمان غنی رضی اللہ تعالیٰ عنہ کے قبول اسلام کا واقعہ لکھیں؟
10. روزے کی فرضیت کے بارے میں اللہ تعالیٰ کا کیا حکم ہے؟

سوال 3: مندرجہ ذیل سوالات کا تفصیلی جواب دیں:

1. حضرت عثمان غنی رضی اللہ تعالیٰ عنہ کی اسلامی خدمات بیان کریں؟
2. کفایت شعاری کے تین فوائد تحریر کریں؟
3. غزوہ خندق کے تین نتائج تحریر کریں؟
4. غزوہ بدر کے اسباب تحریر کریں؟
5. عیدین کی معاشرتی اہمیت تحریر کریں؟
6. روزے کے فوائد تحریر کریں؟
7. عیدین کے چند آداب لکھیں؟