

Pakistan International School Jeddah
Federal Junior Section



Grade 2


A colorful illustration of five children playing in the snow. They are wearing winter clothing like hats, scarves, and gloves. One child is holding a snowball. The background is a light blue sky with falling snowflakes.

Winter Vacation
Homework

Name: _____

Class: _____

Section: _____





Pakistan International School Jeddah

Federal Junior Section

Winter Vacation Holiday (2023-2024)

Class/ Sec: ----- Subject: Islamiyat

Q1: Choose the Correct answer:

1. Muhaamad (SAW)migrated to-----			
1- Egypt	2- Madinah	3-Yemen	4- Abyssinia
2. Muhammad (SAW) was breast fed by-----			
1- Halimah	2- Umm Salmah	3- Nifisah	4-None of these
3. The Arabs used to bury their newborn-----			
1- Slaves	2- Daughters	3-Captives	4- Sons
4. The Arabs before Islam were-----			
1- Co-operative	2- Cruel	3- Kind	4-Innocent
5. Adam (AS) was created from-----			
1- Light	2- Clay	3- Water	4- Fire

Q2: Read the statements Carefully and write “T” for True /”F”for False

1. Teachers try to make their pupils successful in life. ()
2. Allah is self-sufficient. ()
3. The angels were created from light. ()
4. We should help only our friends. ()
5. A good pupil listens to his teacher’s advice. ()

Q3: Fill in the Blanks:

1. We must -----our teachers.
2. School mates should -----each other.
3. Allah is pleased with those who are good to their -----
4. We should----- to our parent’s advice.
5. Teachers become-----when their pupil succeed in their lives.

Q4: Write the answers of following question in “One -Word”.

Q1: What did Allah give Adam (AS)? -----

Q2: From which year the Islamic calendar starts? -----

Q3: How do Muslims treat their housemaid/ boy? -----

Q4: Who is the father of mankind? -----

Q5: What did the Arabs worship before slam? -----

Q5: Write the short answers of following question.

Q1: How should we deal with our family?

A.....
.....

Q2: What is the position of a teacher to his pupil?

A.....
.....

Q3: How do you behave with your schoolmates?

A.....
.....

Q4: What did Allah plan to do on earth?

A.....
.....

Q5: How should we deal with our family?

A.....
.....

Q6: What is the way to please Allah?

A.....
.....

Q7: Why did Iblis refuse to bow down before Adam (AS)?

A.....
.....

Q8: What are our duties towards teachers?

A.....
.....



Pakistan International School Jeddah
Federal Junior Section
Winter Vacation Homework 2023-2024

Name: _____ Class/ Sec: _____

Q1: Choose the Correct answer.

1. What do we call فراشة in English? (Crow. Chair. Butterfly)
2. What do we say غسالة in English? (Sieve Washing machine. Nail)
3. What do we call Monkey in Arabic? (قرد. غراب فيل)
4. The Third letter of word ظفر is (م ر ف)
5. Which word start from ع? (قلم عصفور. لسان)

Q2. Fill in the blanks.

1. Sieve in Arabic is _____ .
3. عنب in English means _____ .
4. What do we call Pearl in Arabic _____ .
5. The word ظرف means _____ in English.
6. The word فواد means _____ in English.

Q3: True & False:

1. The fourth letter of word "لسان" is ر. ()
2. The word "مفتاح" means key in English. ()
3. The word "لحم" means meat in English. ()
4. The word "مصحف" start with م. ()
5. "كتاب" means pen in English. ()
6. The Crow means غراب in Arabic ()

Q4: Write Islamic months names in Arabic and English.

_____ .7	_____ .1
_____ .8	_____ .2
_____ .9	_____ .3
_____ .10	_____ .4
_____ .11	_____ .5
_____ .12	_____ .6

Q5: Separate the letter.

_____ + _____ + _____	قلم
_____ + _____ + _____	موز
_____ + _____ + _____	فيل
_____ + _____ + _____	قفل



Pakistan International School Jeddah Federal Junior Section

Winter vacation homework 2023-2024

Subject –Computer

Name-----

Class -II

Q1: Choose the Correct answer:

1. At-----computer helps in preparing mark sheet and progress report.			
A. book	B. office	C. school	D.tab
2. At -----computer helps to keep record all flights.			
A. Bank	B. hospital	C.colors	D.text
3. Word pad allows you to insert -----and drawing to your document.			
A.no	B. picture	C. close	D. tab
4. Font size changes the size of-----.			
A. book	B .text	C. button	D. dark
5. Italic makes the text look-----			
A. slanting	B. font	C. colors	D. text
6 Font size changes the size of-----			
A. book	B. text	C. button	D. dark
7 Italic makes the text look-----			
A. slanting	B. font	C. colors	D. text

Q2: Fill in the Blanks: Picture, office, start a list, font size, bold. Italic

1. At -----computers help to calculate salary of workers.
2. -----button makes the text dark of the thick.
3. -----button changes the size of the text.

4. -----button allows you to insert picture from computer.

5. -----button allows you to choose different lifestyles.

6. -----makes to the text look slanting.

Q3: True & False:

1. . We can send messages to friends and relatives using a computer.

2. Once you close the paint window the drawing is put on your page in the Document. ()

3. Image button has the option to change your picture with another one from the computer. ()

4. Using start a list button you can make a list of food. Items or your school items. ()

5. At home the computer helps us to listen and music, watch movies. ()

6. The date button allows you to insert date and time in your document. ()

Q4: Question & Answer:

Q1: Which tab helps you to format and arrange your document?

Q2: How can you make the text dark and thick?

Q3: Which button changes the size of the text?

Q4: In which group start a list located?

Q5: Write the name of any one button from insert group.



Pakistan International School Jeddah
G.k Revision sheet 2023-2024

Name : _____ Class/ Sec: _____

Q1. Fill in the Blanks:

1. The earth moves like a _____.
2. Hindus celebrate Diwali and _____.
3. The sun is a _____.
4. _____ is on 10th Zil-Hajj.
5. We must cross the road at the _____ crossing.
6. Muslims celebrate two _____ in a year.
7. Road signs are placed to _____.
8. Besakhi is the religious festival of _____.

Q2. True & False:

1. There are three Eids in a year. ()
2. The shape of the earth is like a ball. ()
3. The rays of the sun give us vitamin D. ()
4. If the light is red the traffic on the road must stop. ()
5. At nighttime we can see the sun in the sky. ()
6. The sun is much closer to the earth. ()
7. There are different road signs that help people on the road. ()
8. A festival is a day of joy and celebration. ()

Q3. Question and Answers

1. When is Eid-ul-Fiter celebrated?

A. _____.

2. What do the parents and elders give to children on Ed?

A. _____.

3. what is Nouroz?

A. _____.

4. What does the sun give us?

A. _____.

5. What causes day and night?

A _____.

6. Who controls the traffic when there is no traffic light?

A. _____.

7. Can the traffic movement the signal is red?

A. _____.

8. When the traffic light is green what does it mean?

A. _____.



Pakistan International School Jeddah

Federal Junior Section

Winter Vacation Holiday (2023-2024)

Class II/ Sec: _____

Subject: English

Name: _____

Q1: Choose the Correct answer:

1. Ants have _____ antennae.			
a. 2	b. 6	c.4	d. none
2What insect makes honey?			
a. spider	b. bee	c. butterfly	d. none
3. Which fruit comes from tree?			
a. bread	b. pear	c. juice	d. none
4. Which part of a tree helps clean the air?			
1- a. roots	2- leaves	c. stem	d. none
5. Circle the long e word.			
a. clean	3- b. heavy	4- c. head	d. bread

Q2: Read the statements Carefully and write "T" for True /" F" for False:

1. Crickets eat leaves and tiny insects. _____
2. A bee has four wings. _____
3. The dog didn't scare the cat. _____
4. A small leaf fell on an ant. _____
5. A spider has two eyes. _____

Q3: Match the Column:

Column -A	Column-B
Words	Meanings
1. shiver	a. send out a current of air
2. blow	b. with fear of cold
3. bite	c. go quickly after someone
4. chase	d. cut something with teeth
5. lift up	e. a sudden feeling of fear
6. scare	f. pick up something

Q4. Fill in the blanks.

1. A butterfly can _____ flower to flower in the garden. (fly-walk)
2. The ladybug is red with _____ spots. (white - black)
3. All insects have _____. (6 legs – 6 hands)
4. We _____ a white dog. (has-have)
5. 2. I _____ nine pencils. (have-has)
6. 3. She _____ a purple bag. (have-has)
7. In the nest there is a _____ (tree-bird)
8. Which word has a long o sound _____ (hole-ground)

Q5: Write the answers to the following questions.

1: Write names of two foods that come from trees?

2: What fell on the little ant?

3: How do we use wood?

4. how can we save trees?

5. Give antonyms of the following words.

Words	Antonyms
1. quickly	
2. morning	
3. behind	
4. clean	
5. happy	

Q6 Give form of the verbs.

1st	2nd	3rd
1. wash		
2. play		
3. walk		
4. talk		
5. travel		

Q 8 reading.

Read page # 90 ,106 and 108 thoroughly.

**Note: Revise Unit 6 and Unit 7 completely. All the work in learner's book,
activity**

book and worksheet booklet.

Worksheet booklet: Revise all the work that has been done in ws booklet.

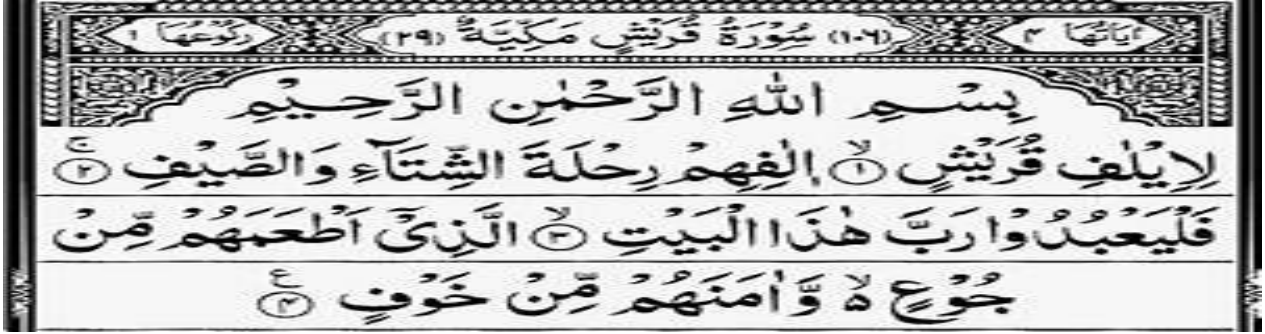


Pakistan International School Jeddah
Federal Junior Section
Winter vacation

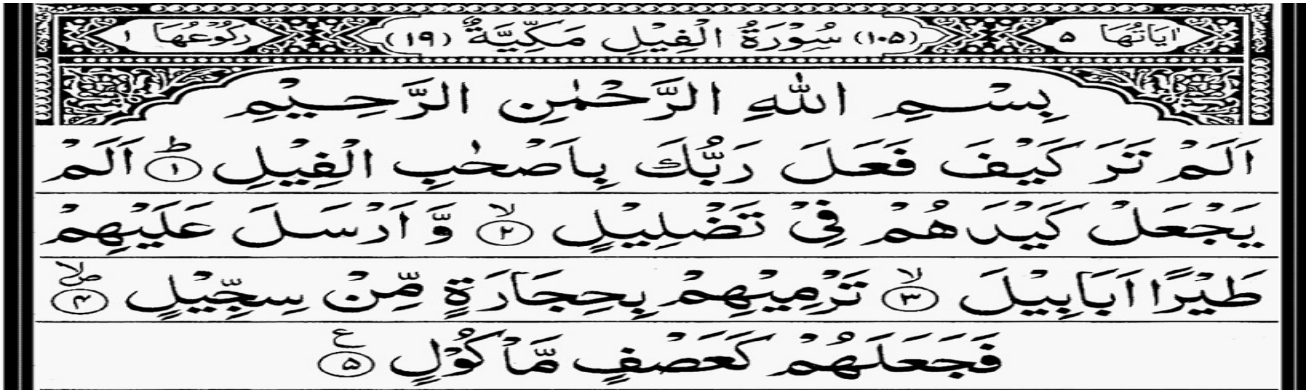
Subject: Quran

Class: II

Q1: Learn Surah Al-Quraish



Q2: Learn Surah Al-Fail.



Q3 Learn the following duas orally.

1: Dua to enter the mosque

اللَّهُمَّ افْتَحْ لِي أَبْوَابَ رَحْمَتِكَ

Dua for leaving the mosque :

اللَّهُمَّ إِنِّي أَسْأَلُكَ مِنْ فَضْلِكَ

Dua at the time of difficulties or facing trouble.

إِنَّا لِلّٰهِ وَإِنَّا إِلَيْهِ رَاجِعُونَ .

Q4: learns Names of Allah from orally.

31	الْخَبِيرُ	AL-KHABEER	The Acquainted, the All-Aware
32	الْحَلِيمُ	AL-HALEEM	The Most Forbearing
33	الْعَظِيمُ	AL-'ATHEEM	The Magnificent, The Supreme
34	الْغَفُورُ	AL-GHAFOOR	The Forgiving, The Exceedingly Forgiving
35	الشَّكُورُ	ASH-SHAKOOR	The Most Appreciative
36	الْعَلِيُّ	AL-'ALEE	The Most High, The Exalted
37	الْكَبِيرُ	AL-KABEER	The Greatest, The Most Grand
38	الْحَفِيظُ	AL-HAFEEDH	The Preserver, The All-Heedful and All-Protecting
39	الْمُقِيتُ	AL-MUQEET	The Sustainer
40	الْحَسِيبُ	AL-HASEEB	The Reckoner, The Sufficient

Q4: Read Surah Al inshiqaq, Surah An-Nazi'at and Surah Al-Ala.



پاکستان انٹرنیشنل سکول العزیزہ جدہ
فیڈرل جونئر سیکشن
موسم سرما کی تعطیلات کا کام
(2023-2024)

مضمون : اردو
جماعت : دوئم
سیکشن : _____
نام : _____

سوال نمبر 1: درست جواب پر دائرہ کا نشان لگائیں۔

6. تحفے دینے سے آپس میں _____ بڑھتی ہے۔			
نفرت	بیماریاں	محبت	نیکیاں
7. امی اور ابو بہت _____ تھے۔			
اداس	پریشان	خوش	ناراض
8. بیمار کا متضاد _____ ہے۔			
طبیعت	صحت مند	کمزور	ناراض
9. اگر ایک چیز سے کام ہو سکتا ہو تو _____ استعمال نہ کریں۔			
پہلی	دوسری	تیسری	چوتھی
10. شان کنی دن سے _____ نہیں گیا تھا۔			
چھت پر	اسکول	بازار	نانی کے گھر

سوال نمبر 2: خالی جگہ پر کریں۔

1. میدو نے کوئے کو _____ سمجھا۔
2. بیمار کو _____ اور سادہ غذا دینی چاہیے۔
3. پودوں کو _____ اور جانوروں سے بچانا چاہیے۔
4. دستوں کی بیماری میں _____ ضرور پلائیں۔
5. شان کا بھائی _____ جماعت میں پڑھتا تھا۔

سوال نمبر 3- غلط اور درست کی نشاندہی کریں۔

6. تیز بخار میں سوکھے کپڑے کی پٹیاں ماتھے پر رکھنی چاہیے۔ (غلط یا درست)

7. میدو کے طوطے کا رنگ نیچے سے نیلا، اوپر سے پیلا تھا۔ (غلط یا درست)

8. لفظ آہستہ کا متضاد تیز ہے۔ (غلط یا درست)

9. لفظ صبح کا متضاد شام ہے۔ (غلط یا درست)

10. لفظ خوش کا متضاد ناراض ہے۔ (غلط یا درست)

سوال نمبر 4- مختصر جواب دیں۔

س1: بچہ شمع کی طرح زندگی کیوں گزارنا چاہتا ہے؟
ج:

س2: شان کے ابو اور امی کیوں پریشان تھے؟
ج:

س3: میدو نے پرندے کو کیا سمجھ کر پالا تھا؟
ج:

س4: بچے کے لب پر کیا آتی ہے؟
ج:

س5: نظم " میدو کا طوطا " میں کتنی بہنوں کا ذکر ہے؟
ج:

س6: زمین نرم کرنے کے لیے کن چیزوں کی ضرورت ہوتی ہے؟
ج:

س7: بارش کی وجہ سے باغوں اور کھیتوں میں کیا آئی ہے؟

ج: _____

س8: پانی کس صورت میں آسمان سے برستا ہے؟

ج: _____

س9: کسی بھی کام کو شروع کرنے سے پہلے کیا پڑھنا چاہیے؟

ج: _____

س10: جب پودے بڑے ہو جائیں تو کیا کرنا چاہیے؟

ج: _____

سوال نمبر5: مندرجہ ذیل اسباق کی خواندگی کریں۔

1- سبق نمبر 12 'برسات'

2- سبق نمبر 13 'عیادت'

3- سبق نمبر 14 'میں خیال رکھتا ہوں'

4- سبق نمبر 16 'بچے کی دعا'



Pakistan International School Jeddah
Federal Junior Section
Winter vacation Task 2024
Subject: G.Science

Name: _____ Class/ Sec: _____

Q1. Fill in the Blanks:

1. Birds have _____ wings to fly.
2. Animals can walk, crawl, _____ and swim.
3. A _____ develops from egg of hen.
4. The frog has _____.
5. Tortoise and scorpion live in _____.
6. Mother kangaroo keeps her baby in its _____.
7. All flying animals lay _____ except bats.
8. Dolphin and sharks give _____ to young ones.

Q2. True & False:

- 1: Bees and bugs live on mountains. ()
- 2: Cat and horse have four legs and run fast ()
- 3: Bats give birth to young ones. ()
- 4: Ant is a social animal. ().

Q3: Choose the best answers:

- 1: Tentacles of octopus help it in catching _____ (prey, eggs, plants).
- 2: Living place of a camel is _____ (desert, forest, trees).

3: Tadpole is different from adult frog by: (having tail, having eyes, ability to swim).

4: Insects are tiny _____ on land. (creatures, birds, features).

5: Young one of butterflies is called. (Tadpole, caterpillar, pupa).

Q4: Question and Answers

1. What is the difference between tadpole and adult frog?

A. _____.

2. How is a horse different from an eagle?

A. _____.

3. What is a caterpillar?

A. _____.

4. Why do animals need homes?

A. _____.

5. How do animals look after their young ones?

A. _____.

6. Name some places where land animals live?

A. _____.

7. What changes occur in baby animals to become an adult?

A. _____.



Pakistan International School Jeddah
Federal Junior Section
Winter vacation2024

Name: _____ Class/ Sec: _____

Q1: Choose the Correct answer: -

1. What are the units of length?			
A. kg and g	B. m and cm	C.L / ml	D. None of these
2. Centimeter is used to measure things			
A. medium	B. big	C. small	D. coloured
3. What is the sum of 97 m and 81 m .			
A. 45	B. 133 m	C.178m	D. 123 m
4. The weight of ring is measured in_____.			
A. m	B.g	C.kg	D. cm
5. The mass of a human is measured in			
A. g	B.kg	C.m	D.ml

Q2: Fill in the Blanks:

1. Add and write $29m+32m=$ _____
2. The length of table usually measured in _____ (must write in full form)
3. e mass of a meat usually is measured in _____ (must write in fullform.
4. Human weight usually is measured in _____. must write in full form.
5. The length of pen is measured in _____ must write in full form.

Q3: True & False:

1. $6 \times 4 = 56$ ()
2. m and kg are the units of length ()
3. The capacity of water tank is measured in liter ()
4. The mass of cars is measured in kg. ()
5. $70\text{ml} - 45\text{ml} = 25\text{ml}$ ()

Attempt all questions from the following.

Q1: A jug has 80 ml juice in it. Nadia poured 20 ml juice into the glass.

What is the total quantity of juice in the jug?

A. _____

Q2: Solve the following.

1- 79ml

- 49ml

3- 88kg

+ 28kg

2- 97g

- 56g

4- 59L

+ 35L

Q3: Mass of Anum's bag is 19 kg and mass of Amina's bag is 9 kg. What is the total mass of both bags. Also identify whose bag's mass is lesser than other?
